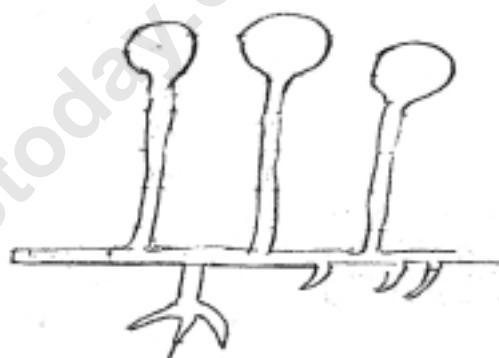
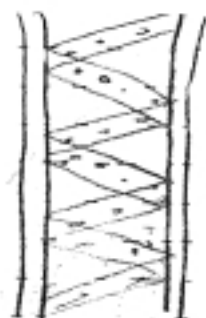



L-2

Micro-roganisms : Friend and Foe

- 1) Identify the class of micro organisms to which the following organisms belong.

Key -- Algae, Protozoa, Fungi, Bacteria



- 2) Give one word for the following statements :-

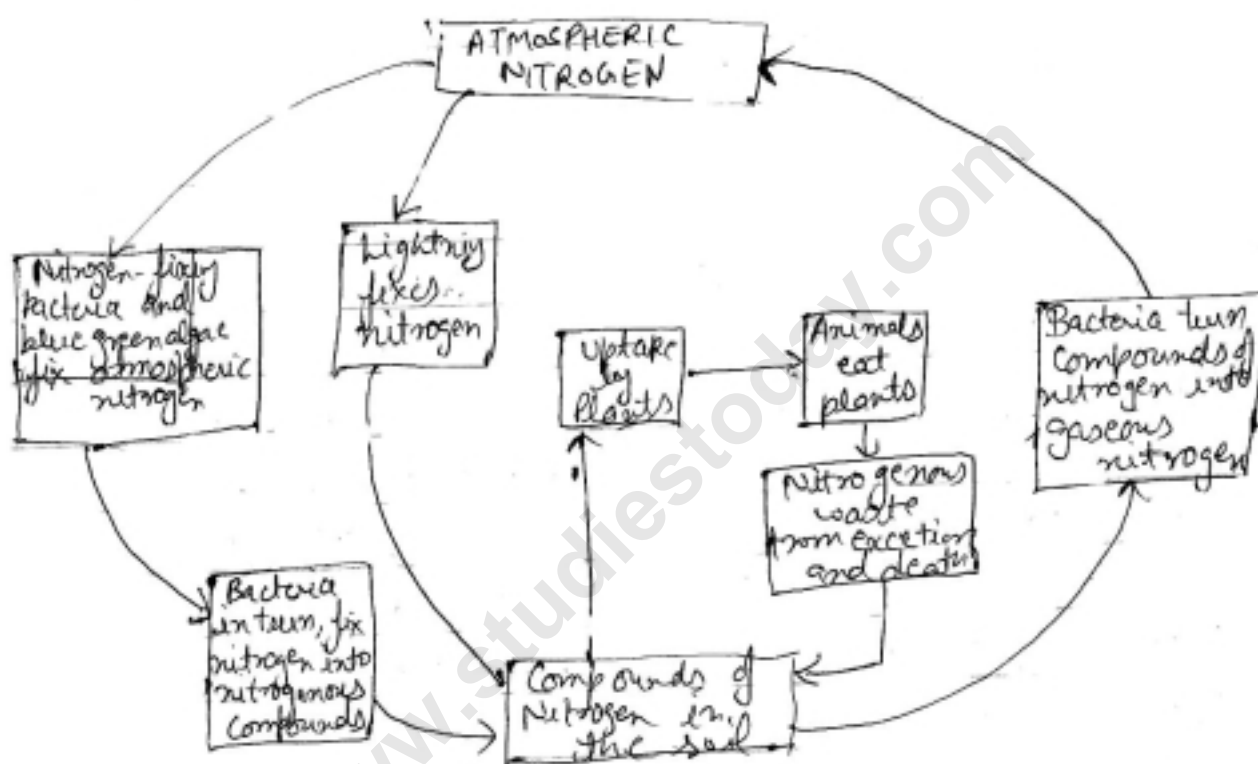
- a) The organisms which we cannot see with naked eyes. ☐
- b) Bacteria which promotes the formation of curd. ☐
- c) The medicines used to kill or stop the growth of micro organisms. ☐
- d) Cholera, common cold, chicken pox and tuberwlosis is are examples of ☐
- e) Malaria is caused by ☐

- 3) Complete the following table.

Human&Disease	Casual Organism	Mode of Transmission
Measles	Air

Typhoid	Bacteria
Malaria	Mosquito
Polio	Virus
Tuberculosis	Air

4. After studying Nitrogen - Cycle, Answer following Questions



NITROGEN - CYCLE

- Which organism converts atmospheric nitrogen into nitrogenous compounds.
.....
 - Which gas is fixed by lightning.
5. Fill in the blanks :
- Conversion of sugar into alcohol is called _____.
 - Atmosphere has _____% of nitrogen gas
 - Yeast produces _____ gas during respiration.
 - During Pasteurisation, milk is heated upto _____°c for _____secs.