




**THE INDIAN HEIGHTS SCHOOL**

**Class VII**  
**Geography**

**NAME-****DATE- 6.9.13**

Q1 Observe the photographs given below. These are various features made by the river. Identify them and tell whether they are erosional or depositional or landforms formed by both.

<b>Photograph</b>	<b>Name of the feature</b>	<b>Type (Erosional Depositional or Both)</b>
		
		
		

Q2 Name some major waterfalls of the World

---

---

---

---

---

---

---

---

---

---

Q3. Label the diagram given below:

