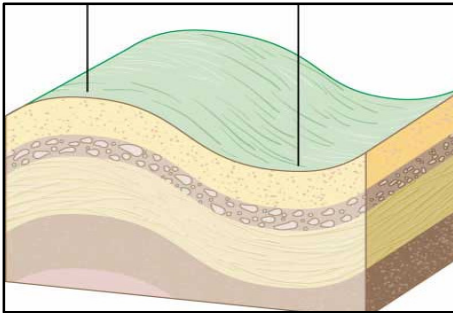
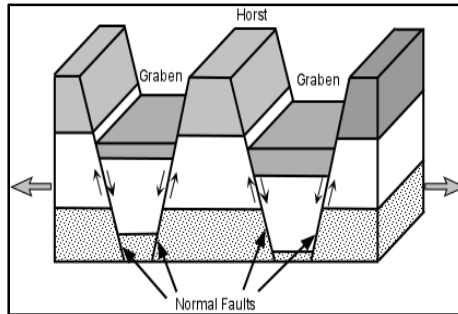


**Date of Submission- 11/11/13l.**

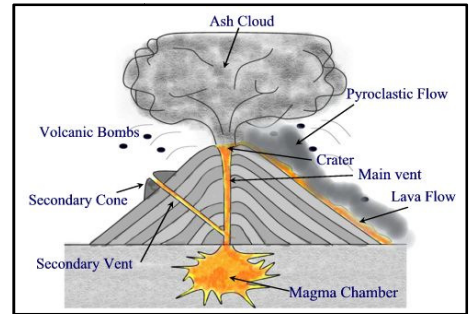
Analyze the three diagrams below with respect to the following.



A



B



C

- (i) Name the types of mountains shown in each of the diagram A, B and C.
- (ii) Associate the following processes with each type of diagrams and briefly describe them.
  - (a) Upliftment and Subsidence
  - (b) Collision of tectonic plates
  - (c) Volcanic eruptions

**Note-** You must draw the diagrams shown above while answering the question in your notebook.