

Class-VI

L-14

Water

1. List any four uses of water.

.....

.....



.....

.....

2. Write various sources of water on the earth and draw any two sources?

.....

.....



Any 2 sources of water

3. Tick (✓) the correct option _

I Large drops of water fall down on the earth in the form of.

- | | |
|------------------------------------|------------------------------------|
| a) Stones <input type="checkbox"/> | c) Clouds <input type="checkbox"/> |
| b) Rain <input type="checkbox"/> | d) Leaves <input type="checkbox"/> |

II Flood causes great damage to

- | | |
|------------------------------------|--|
| a) Crops <input type="checkbox"/> | c) Animals <input type="checkbox"/> |
| b) Humans <input type="checkbox"/> | d) All of these <input type="checkbox"/> |

III Transpiration is the process of _

- | | |
|----------------------------------|--------------------------|
| a) Absorbing water by plants | <input type="checkbox"/> |
| b) Making food for green plants. | <input type="checkbox"/> |

- c) Seeping of rain water under the ground. ☐
- d) Loss of water by plants in the form of water vapour ☐


IV We can conserve water by_

- a) Using shower instead of bucket ☐
- b) Letting water run while brushing ☐
- c) Adopting rainwater harvesting ☐
- d) By having leaky taps. ☐

4. Coin one word for the following __

- i) Collection and storage of rainwater for future use_____.
- ii) Changing of water into water vapour_____.
- iii) A condition caused due to no rainfall in a particular region for a long time _____.
- iv) A condition caused due to continuous heavy rain in a region _____.

5. Draw and colour water cycle.



WATER CYCLE

6. Can you identify the following.

