

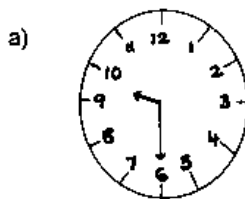
CHAPTER : 10 TIME

Fill in the blanks:-

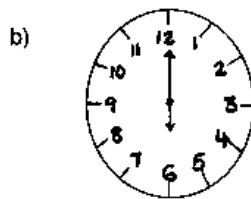
1. 1 hour = _____ minutes
2. 1 hour = _____ seconds
3. 1 minute = _____ seconds
4. 1 day = _____ hours.
5. The time between 12 midnight to 12 noon is called _____.
6. The time between 12 noon to 12 midnight is called _____.
7. a.m. stands for _____.
8. p.m. stands for _____.
9. We should not write a.m. or p.m. for the time _____.
10. 7:00 a.m. = _____ hours.
11. 12:15 a.m. = _____ hours.
12. 11:40 a.m. = _____ hours.
13. 17:00 hours = _____ (12 hour clock)
14. 00:10 hours = _____ (12 hour clock)
15. 21:45 hours = _____ (12 hour clock)

Do the following

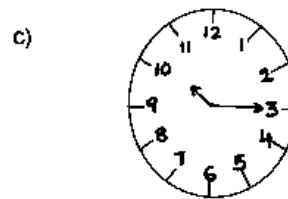
1. Give the time. Use a.m. or p.m.



Dinner time



Waking up time



Breakfast time

2. Fill in the blanks with a.m. or p.m.

- a) Aneesha's school has break time at 10:15 _____.
- b) Arvind's school starts at 8:45 _____.
- c) Kareem's school gets over at 3:30 _____.
- d) Beenu has lunch at 2:00 _____.
- e) The sun sets at 6:30 _____.

3. Is it daylight or darkness at the following times?

- a) 4:15 p.m. _____
- b) 1:30 a.m. _____
- c) 3:20 a.m. _____
- d) 12:45 p.m. _____
- e) 12:00 noon _____

4. What is the time? Use a.m. or p.m.

- a) 2 hours before 9:30 a.m.
- b) 1 hour after 6:40 p.m.
- c) 4 hours before 12 midnight.
- d) 3 hours after 8:05 a.m.

5. Rewrite these sentences using 24 hour clock.

- a) Mrs Kaul goes for jogging at 5:45 a.m.
- b) The night show starts at 9:00 p.m.
- c) Rahul's tuition class begins at 8:30 a.m.
- d) The flight was delayed and came at 1:55 p.m.

6. Is it daylight or darkness?

- a) 00:30 hours.
- b) 21:45 hours
- c) 15:00 hours
- d) 13:40 hours.
- e) 04:35 hours.
- f) 08:20 hours.

7. Write out both the 12 hour clock and the 24 hour clock for every hour starting from 12 noon upto 12 noon the next day.