




How do elephants talk to each other?



Find the volume of the following objects. Then match the letters next to the answers to the decoder below to find the answer to the question.



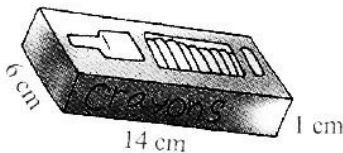
480 cu. cm (E)




(B)



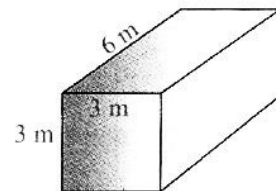
\_\_\_ cu. cm (P)



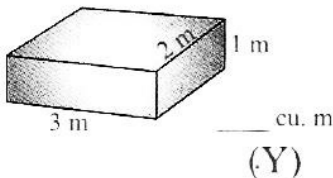
\_\_\_ cu. cm (L)



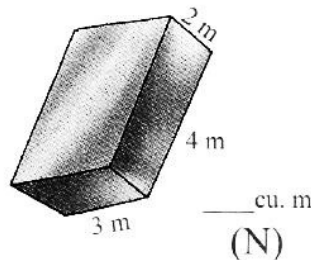
\_\_\_ cu. cm (E)



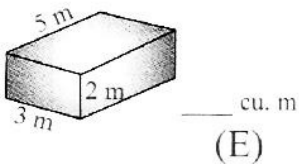
\_\_\_ cu. m (H)



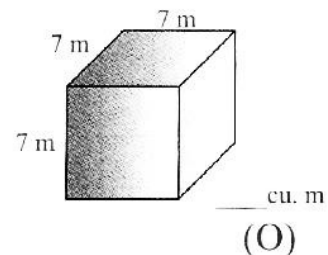
(Y)



(N)



(E)



(O)

Decoder

432 cu. cm      6 cu. m  
,      E      !  
480 cu. cm      84 cu. cm      336 cu. cm      750 cu. cm      54 cu. m      343 cu. m      24 cu. m      30 cu. m