

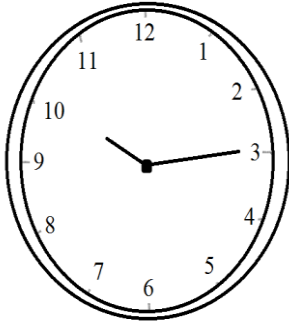
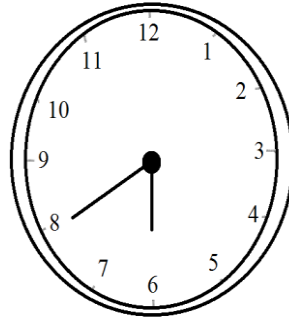
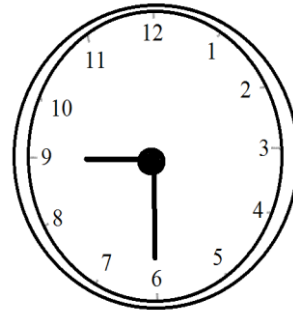
Topic : Shapes and Angles
Worksheet 2

Date: _____

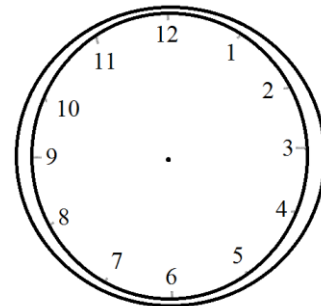
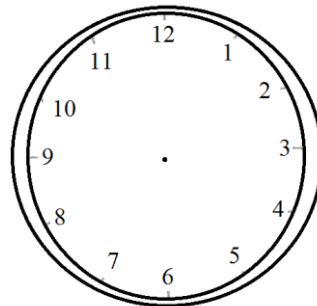
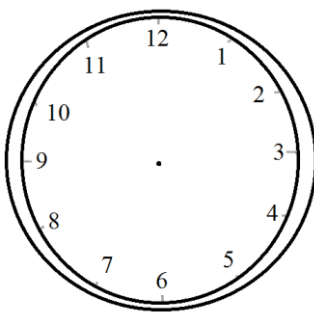
Month: _____

Competency-Understanding Basic Concepts

1. What kind of angle (acute , obtuse , right) is made by the hands of these clocks. Also write the time.

Angle Time Angle Time Angle Time

2. Draw the hands of the clock when they make an angle greater than a right angle.



Teacher's Signature

Parent's Signature