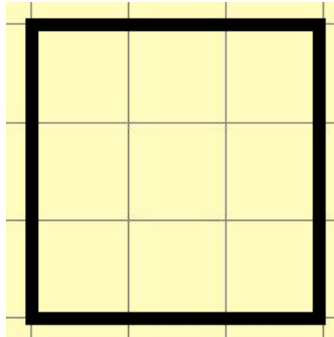
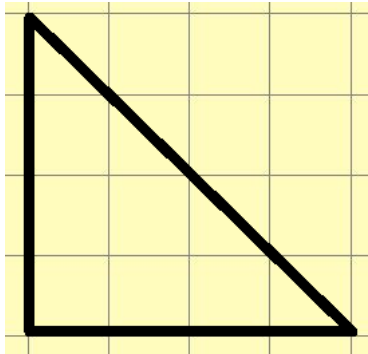


Topic :- How many Squares?
Worksheet 3

Date: _____

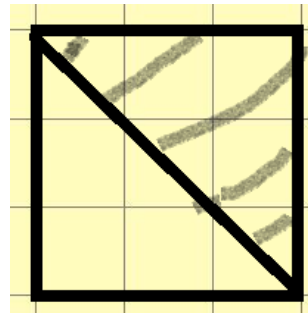
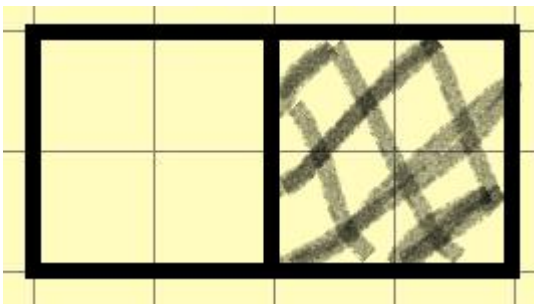
Month: _____

Competency-Ability to Compute



1. Is the area of both the figures same? Give reasons for your answer.

2. What is the area of the shaded part?



Teacher's Signature

Parent's Signature