

Topic: How Heavy How Light?

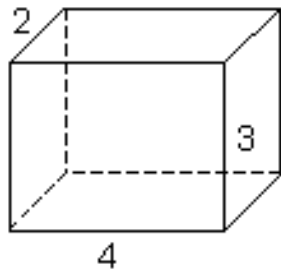
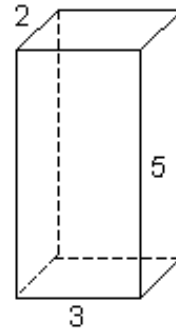
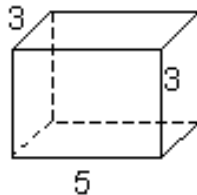
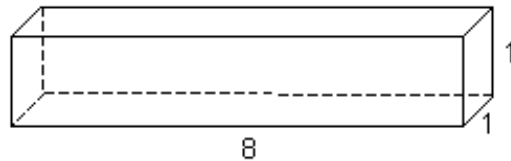
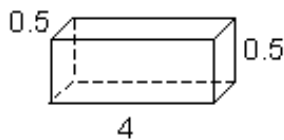
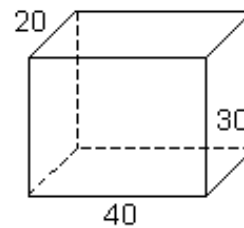
Worksheet No : 3

Date : _____

Month: _____

Competency : Ability to Compute

Calculate the volumes for each of the objects below.
(the measurements are all in centimeters (cm))

volume = cm^3 volume = cm^3 volume = _____ cm^3 volume = _____ cm^3 volume = _____ cm^3 volume = _____ cm^3

Teacher's Sign _____

Parents Sign _____