

## Topic: How Heavy How Light?

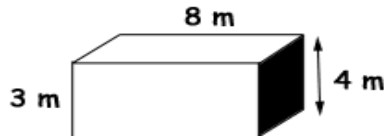
Worksheet No : 2

Date : \_\_\_\_\_

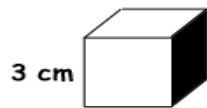
Month: \_\_\_\_\_

Competency : Understanding Basic Concepts

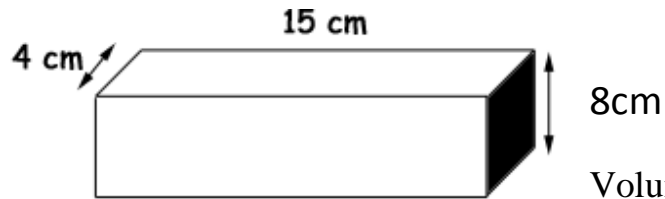
Work out the volume of each shape below being careful to use the correct units:



Volume = \_\_\_\_\_ cm cubes



Volume = \_\_\_\_\_ cm cubes



Volume = \_\_\_\_\_ cm cubes



Volume = \_\_\_\_\_ cm cubes

Teacher's Sign \_\_\_\_\_

Parents Sign \_\_\_\_\_