

Topic: How Heavy How Light?

Worksheet No : 1

Date : _____

Month: _____

Competency : Formation of Numbers


The shapes below are made from centimeter cubes. Work out the volume of each one




Volume = _____ cm cubes



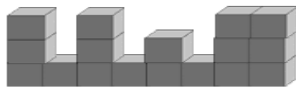
Volume = _____ cm cubes



Volume = _____ cm cubes



Volume = _____ cm cubes



Volume = _____ cm cubes

Teacher's Sign _____

Parents Sign _____