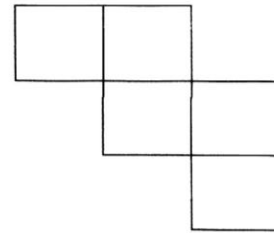
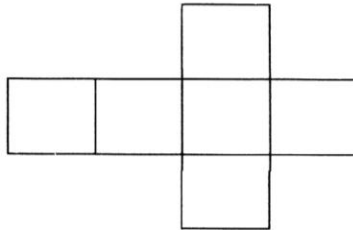


Topic : Boxes and Sketches  
Worksheet -1

Date \_\_\_\_\_  
Month \_\_\_\_\_

Cometency : Understanding Basic Concepts

Which of these nets will make a cube, tick them




II Match each net provided in coloumn A to its corresponding object in coloumn B

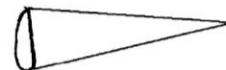
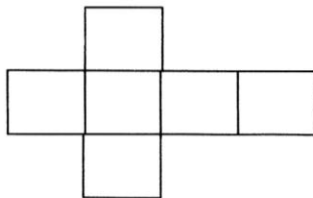
A

B

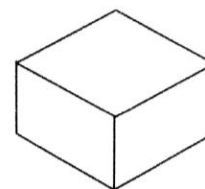
1.



2.



3.



Teacher's Signature

Parent Signature