

Topic : Be My Multiple I will be Your Factor


Worksheet 4

Date: _____

Month: _____

Write the prime factorization for the following numbers


a) 40




b) 78



c) 120



d) 52



b) Using the factor tree write the prime factorization for the following

a) 72



b) 24



Teacher's Sign _____

Parent's Sign _____