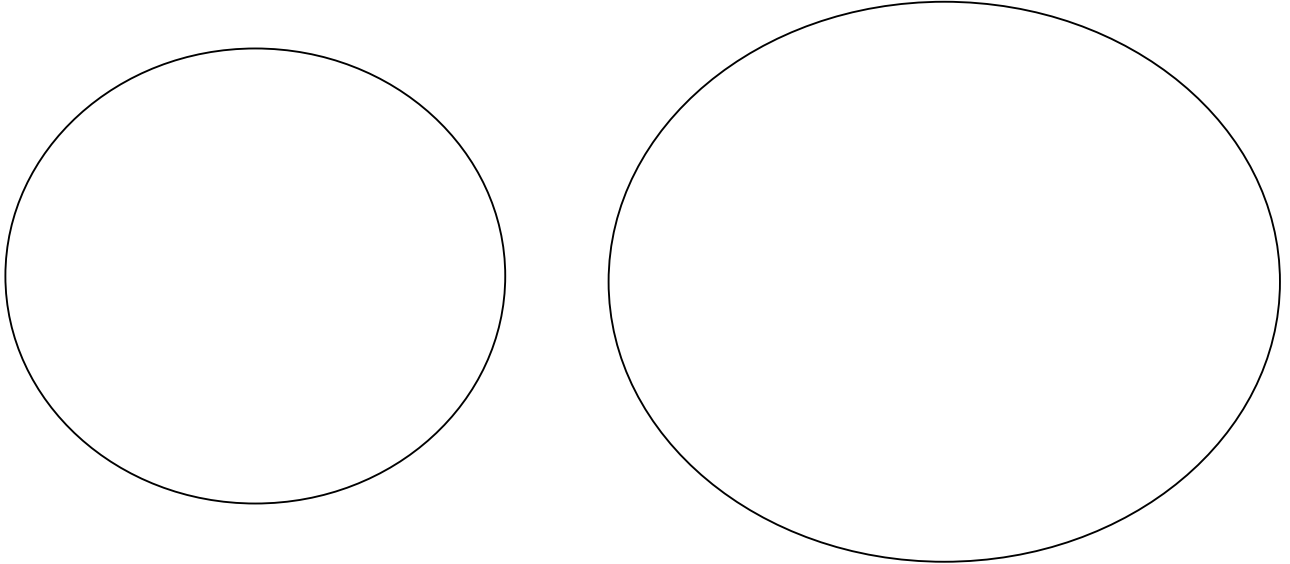


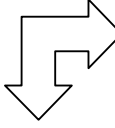




THE AIR FORCE SCHOOL
CLASS IV SOCIAL SCIENCE HW WORKSHEET
TOPIC- THE COASTAL PLAINS AND THE ISLANDS
 SUBMISSION DATE-31 Aug,2013

Q1. Given below are two circles representing the two island groups of India. Choose the circle wisely to depict each island group. Write at least 4 important points related to each island inside the circle.



(Write the names of the islands on the lines above)

Q2. Four ships are waiting to unload their cargo on a particular seaport on the beautiful coasts of India . Is the seaport on the west coast or east coast of India ? Help the ships find their way to the correct coast and the correct state!

				
SEAPORT	MUMBAI	PARADWIP	KANDLA	VISHAKAPATNAM
COAST				
STATE				