

**International Indian School, Jeddah**

**EVS WORKSHEET L – 2 (Inside your body)**

Name \_\_\_\_\_

Sec \_\_\_\_\_

Class – IV

**I. Fill in the blanks:**

- a) The process of changing food into a form in which it can be absorbed is called \_\_\_\_\_.
- b) \_\_\_\_\_ helps in excretion of waste material from the body.
- c) Our heart beats \_\_\_\_\_ times in a minute.
- d) \_\_\_\_\_ carry pure blood from the heart to different parts of the body.

**II. Tick the correct answer :-**

- a) The lungs are an important (internal/external) organ of the body.
- b) The (liver/brain) has control over every activity of the body.
- c) The job of the large intestine is to (digest food/throw out waste).
- d) The shape of our kidney is like a (pea/bean).
- e) The large intestine is (wider/narrower) than the small intestine.

**III. Make the correct sequence(order) of organs for the following:**

- a) Passage of air inside the body:

Lungs, Nose, Windpipe, ...

\_\_\_\_\_.

- b) Passage of food inside the body:

Stomach, Food pipe, Small Intestine, Mouth, Rectum, Large Intestine.

\_\_\_\_\_.

**IV. One word answer:**

- 1) The sound of the heart while pumping blood is called

\_\_\_\_\_.

- 2) Name the internal organ which is like a spongy bag filled with air.

\_\_\_\_\_.

3) Name the long, coiled tube like structure of the digestive system. \_\_\_\_\_.

**V. Give reason of the following.**

1). we breathe faster after a 100 m run.

---


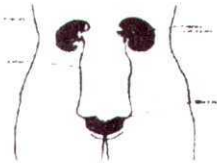



---

2). Brain is considered to be the most important organ of our body.

---

---

**VI. Match the following columns:**

	A		B
(a)			
(b)			
(c)			
(d)			
(e)			
			Circulates blood
			Control centre of body
			Respiration
			Excrete waste
			Digests food