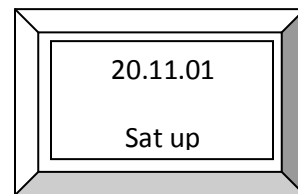
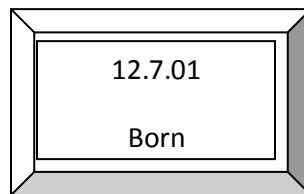
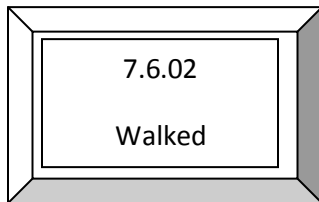
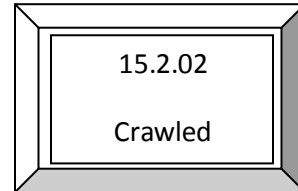
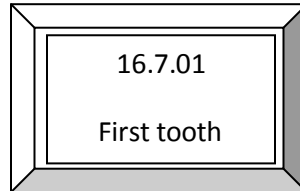
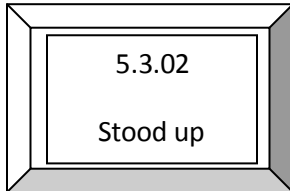


WORK SHEET NO. 4

Date_____

Month_____

Competency : Problem Solving Ability**A. Rearrange these events in order and draw the time line and answer below**

How old was Seema?

- a. When she walked? _____
- b. When she sat up? _____
- c. When she crawled? _____

Teacher's Signature**Parent's Signature**