

Date-


WORK SHEET
SUBJECT- MATHS

NAME OF THE STUDENT-


CLASS- IV SECTION-

Q1. Draw where the hands will be.

a) 20 minutes before 6 o'clock



b) 30 minutes after 8 o'clock




c) 45 minutes after 4 o'clock



d) 15 minutes before 12 o'clock



Q2. See the following dice. The number on the opposite faces of this dice add up to 7.



- a) Which number was on the opposite side of 5?
- b) In the picture, which number will be at the bottom?
- c) Which number will you see if you turn the dice left from 5?

Q3. Change into 24-hour clock time.

- a) 7:30 a.m.-..... b) 12:45 p.m.-.....
- c) 2:55 p.m.-..... d) 12:05 a.m.-.....

Q.4 Fill in the blanks.

- a) Any day of a month can repeat itself for maximumtimes.
- b) Was 2006 a leap year?
- c) A leap year comes after every years.
- d) 1 week = hours .
- e) A camp started on 14th November . If it lasts for 20 days, it ends on

(PTO)

Q.5) Draw front, side and top view of the following

| <i>Top</i> | <i>Front</i> | <i>Side</i> |
|-----------------|--------------|-------------|
| a) Spoon | | |
| b) Railway Line | | |
| d) A Scooter | | |

Q6. Draw a net of a Cuboid .

Q7. A party started at 7:50 pm and ended at 9:30 pm . How long the party last?
