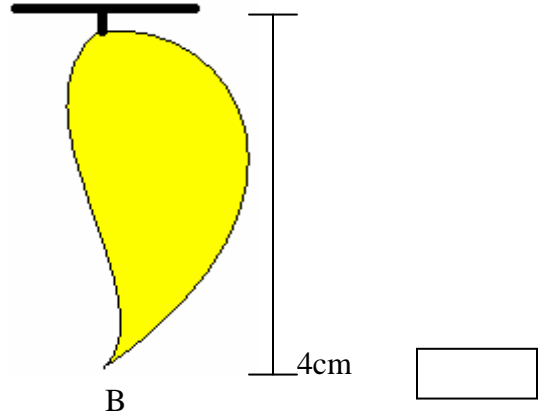
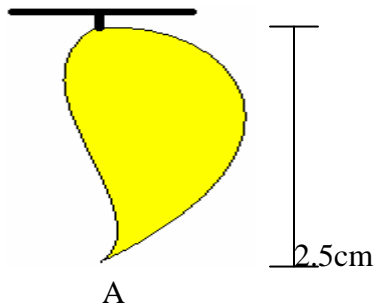


## CHAPTER 2

### LONG AND SHORT

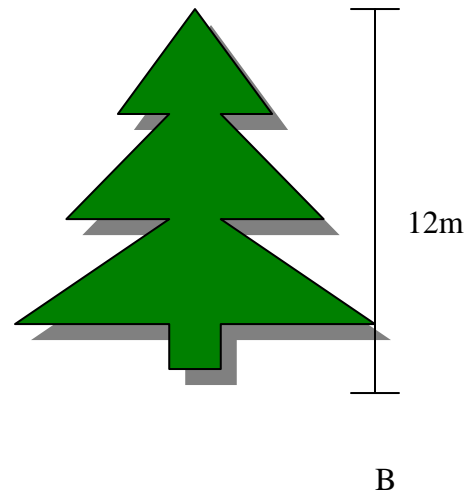
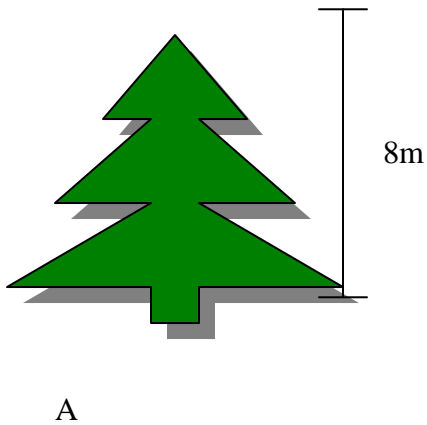
Ques.1 Which mango is shortest?

कौन सा आम छोटा है ?



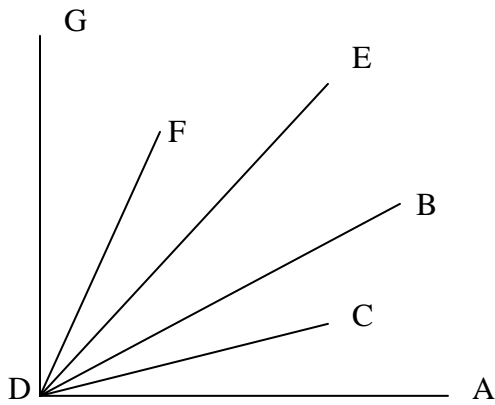
Ques.2 Which tree is longest?

कौन सा पेड सबसे बडा है?



Ques.3 Which dots is nearest to D?

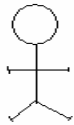
कौन सा बिन्दू D के पास है ?




Ques.4 Which figure is longer?

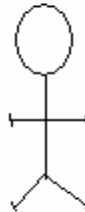
कौन सी आकृति बड़ी है ?

10cm



A

15 cm



B

Ques.5 Which moon is longest in figure?

कौन सा चन्द्रमा की आकृति बड़ी है ?



A



B




C



D

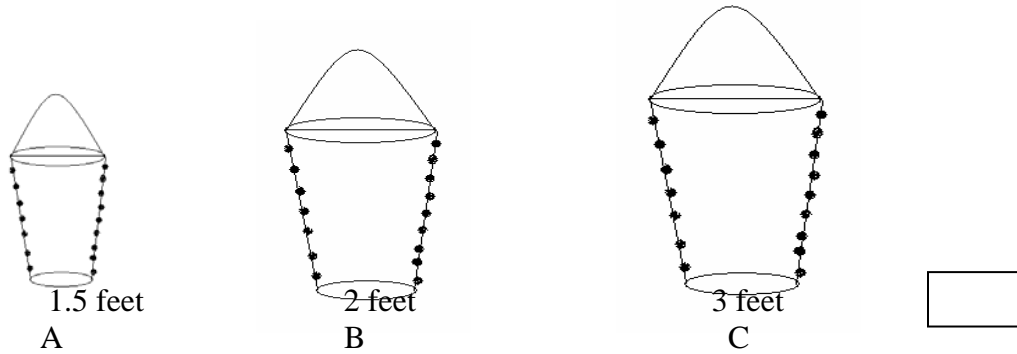
Ques.6 Which is shorter: sun or star?

कौन सा छोटा है, सूरज या तारा ?



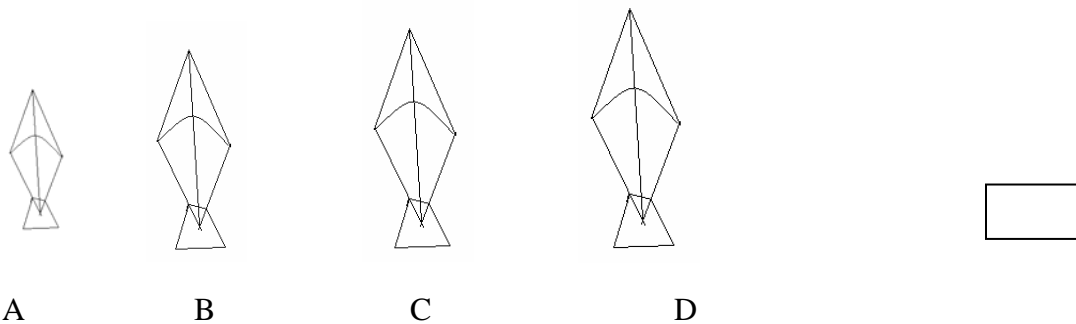
Ques.7 Which bucket is longest of all?

सभी बाल्टियों में कौन सी बाल्टी बड़ी है |




Ques.8 Which kite is shortest?


कौन सी पतंग छोटी है |



Ques.9 Which line is shorter AB or XY?

कौन सी लाईन छोटी है ?

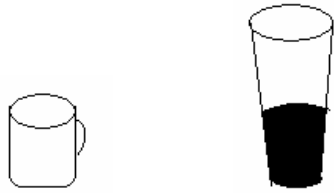
A  B  
5 cm

X  Y  
8cm



Ques.10 Which is longer cup or glass?

कौन सा बड़ा है कप या गिलास ?

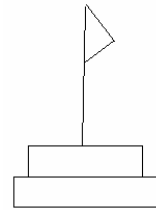
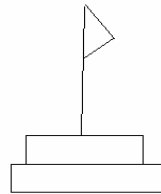
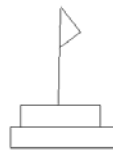


Cup/ कप

Glass / ग्लास

Ques.11 Which Flag is longest of all?

सभी झंडो मे कौन सा झंडा बड़ा है



A

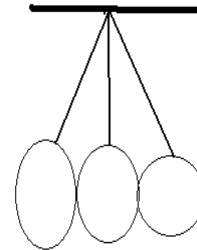

B

C

D

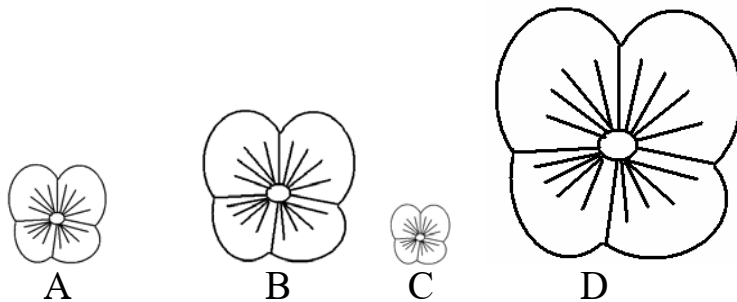
Ques.12 Which fruit is shortest?

कौन सा फल सबसे बड़ा है ?

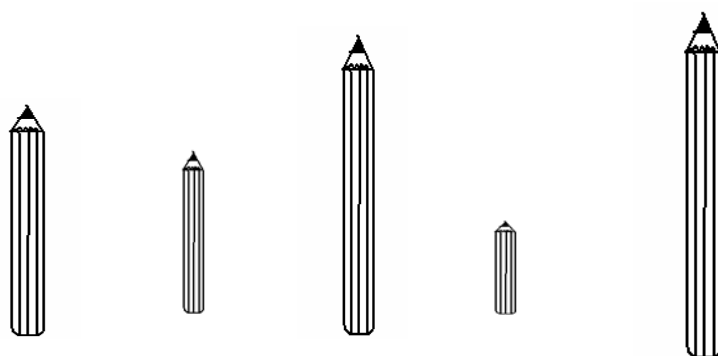



Ques.13 Which flower is longer?

कौन सा फूल सबसे बड़ा है ?




Ques.14 Which pencil is longer?  
कौन सी पेंसिल बड़ी है ?




Ques.15 Which triangle is longer in all of them.  
कौन सा त्रिभुज बड़ा है ?

