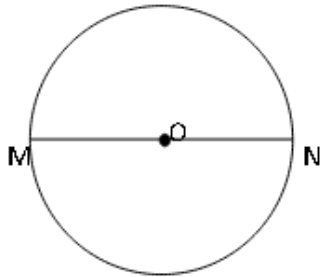


**THE AIR FORCE SCHOOL**  
**Class IV MATHS HW WORKSHEET**  
**SUBMISSION DATE: 25 October ,2013**

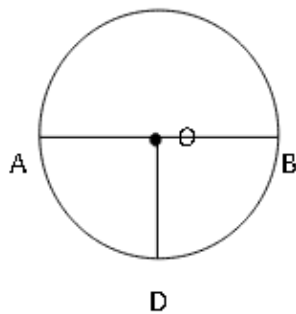
**Identify centre, radius and diameter of the given circles.**



Center = \_\_\_\_\_

Radius = \_\_\_\_\_ or \_\_\_\_\_

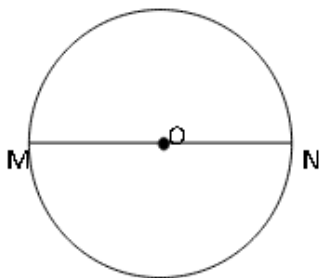
Diameter = \_\_\_\_\_



OD = \_\_\_\_\_

AB = \_\_\_\_\_

O = \_\_\_\_\_



Center = \_\_\_\_\_

Radius = \_\_\_\_\_ or \_\_\_\_\_

Diameter = \_\_\_\_\_