

WORK SHEET NO. 2

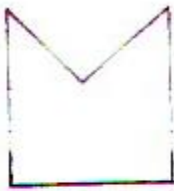
Date_____

Month_____


Competency : Understanding Basic Concepts

1. Tick (✓) mark the face of the brick.

1.



2.




3.



4.



2. Observe the following pictures and answer the question below.



Which wall is stronger and why?

Teacher's Signature

Parent's Signature