

O. P. JINDAL SCHOOL, RAIGARH (CG) 496 001

Phone: 07762-227042, 227293, 227001 (Extn. 49801, 49802, 49804, 49806); Fax: 07762-262613; website: www.opjsrgh.in; e-mail: opjsraigarh@jpl.com

WORKSHEET

Subject : Mathematics

Class : IV {CB-Chapter 11 and 13 }

Name of the student : _____

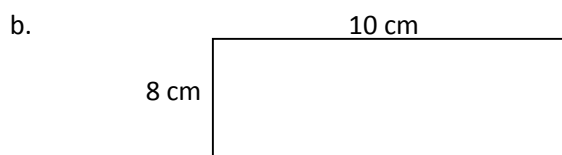
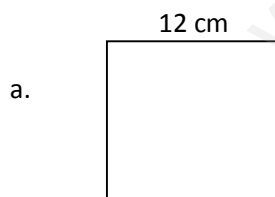
Section : _____

Q.1. Make table of 9 by using tables of 3 and 6.

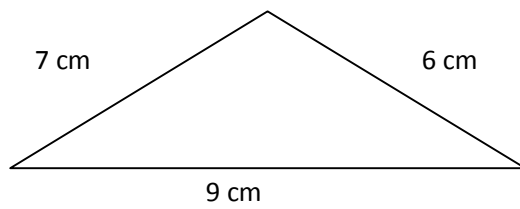
Q.2. Leela has not gone to school for 35 days. For how many weeks was she away from school?

Q.3. Neelu brought 15 story books to her class. Today 30 students are present. How many children will need to share one book?

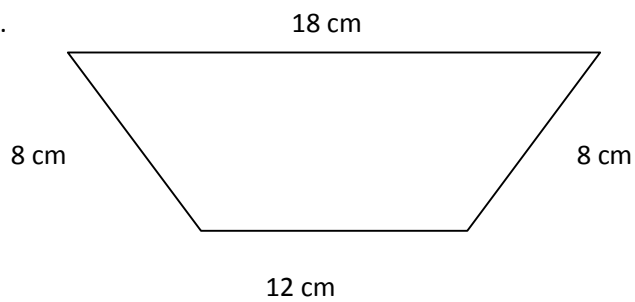
Q.4. Find out the perimeter of the given figures.



c.



d.



- Q.5. Ganpat's wife works in a tailor's shop. She has to fix lace around a table cloth. She bought a 100 m roll of lace. Look at the table cloth and tell how much lace is used for one table cloth?

