

TOPIC: Who is heavier?

Date_____

WORK SHEET No. 1

Month_____

Competency: Understanding Basic Concepts**I. Tick the object that will weigh more:**
☐

☐

☐

☐

☐

☐

☐

☐

☐

☐
II. Encircle the heavier weight:

20g

50g

5kg

8kg

250g

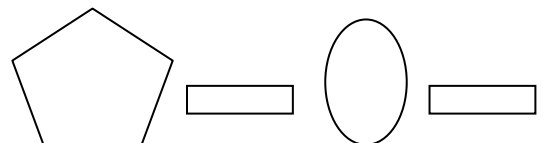
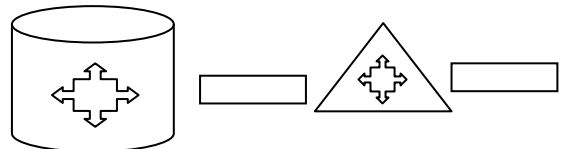
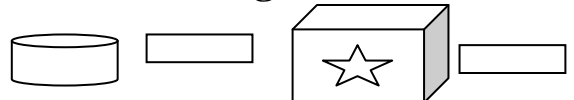
175g

50kg

276kg

100kg

100g

III. Tick the object that will weigh less:

Teacher's Signature

Parent's Signature