

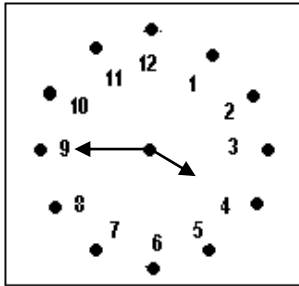
Teacher's Signature _____

Parent's Signature _____

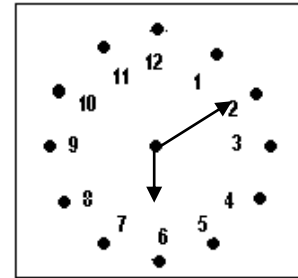
WORK SHEET No. 2

Date _____

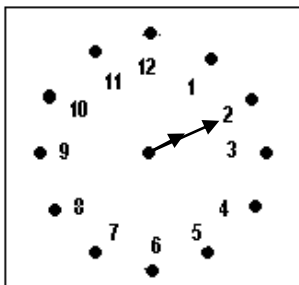
Month _____

Competency: Understanding Basic Concepts**I. Match the watch with the correct time:**

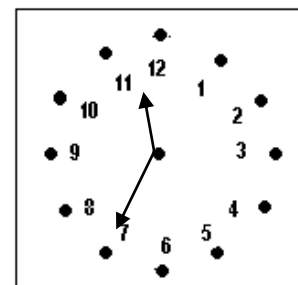
2:10



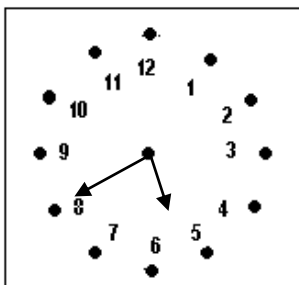
40 minutes past 5



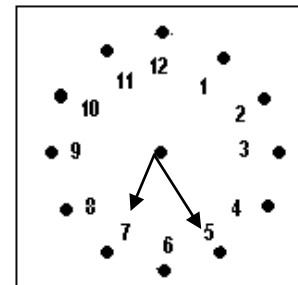
3:45



7:25



10 minutes past 6



11:35

II. Draw the clocks and show the following time:

2:30

4:45

Teacher's Signature _____

Parent's Signature _____