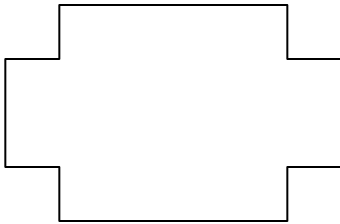

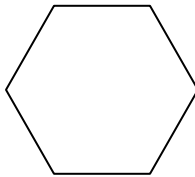
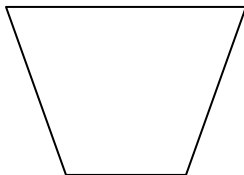


WORK SHEET NO. 2

Date_____

Month_____

Competency: Understanding Basic Concepts**1. Count the number of Edges and Corners in these figures.****a)****Edges = _____****Corners = _____****b)****Edges = _____****Corners = _____****c)****Edges = _____****Corners = _____****d)****Edges = _____****Corners = _____****Teacher's Signature****Parent's Signature**