



# CHENNAI PUBLIC SCHOOL

◆ Anna Nagar ◆ Chennai -600 101

## Weekend worksheet III

### MATHEMATICS

Class ▶

I



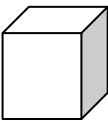
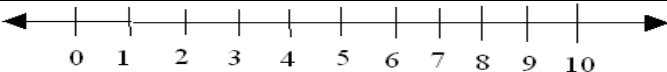
Section ▶

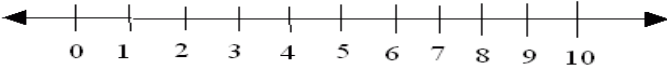
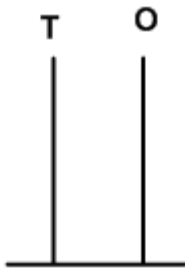

Date ▶

05-07-14

Name ▶

Roll No. ▶

I.	Rewrite the numbers from the biggest to the smallest:	
1.	19 , 17 , 14 , 12 - _____	
2.	18 , 10 , 9 , 13 - _____	
3.	14 , 13 , 8 , 3 - _____	
II.	Write the position of the objects:	
	  	
1.	The cube is in the _____ position.	
2.	The star is in the _____ position.	
3.	The circle is in the _____ position.	
III.	Add the following by drawing sticks :	
1.	4 + 4 = _____	
2.	5 + 3 = _____	
IV.	Add on the number line :	
		
1.	4 + 5 = _____	

2.		
	$3 + 4 = \underline{\hspace{2cm}}$	
v.	Draw the beads on the abacus for the given numbers:	
1.		
	<div style="border: 1px solid black; padding: 2px; display: inline-block;">12</div>	
2.		
	<div style="border: 1px solid black; padding: 2px; display: inline-block;">16</div>	

THE END