



CHENNAI PUBLIC SCHOOL

◆ Anna Nagar ◆ Chennai -600 101

Weekend Worksheet – V

MATHS

Class ▶

III

Section ▶

Date ▶




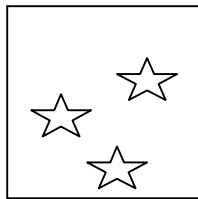

18.07.2014

Name ▶

Roll No. ▶

I. Multiplication is repeated addition



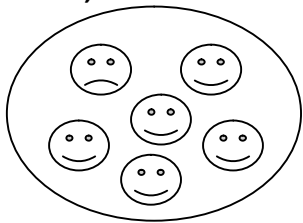
A



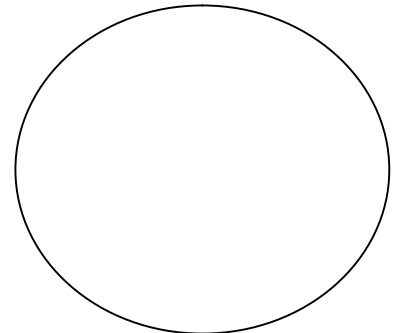
$$3 + 3 + 3 + 3 + 3 = \boxed{}$$

$$3 \times 5 = \boxed{}$$

b,







=




$$6 \times 3 = \underline{\hspace{2cm}}$$

II. Draw your own picture for the multiplication given down:



=



$$5 \times 5 = \underline{\hspace{2cm}}$$

III. Draw the number line for multiplying .

$$1. \quad 4 \times 3 = \underline{\hspace{2cm}}$$

$$2. \quad 3 \times 7 = \underline{\hspace{2cm}}$$