



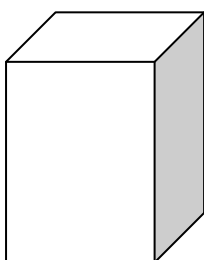
# CHENNAI PUBLIC SCHOOL

◆ Anna Nagar ◆ Chennai -600 101


## Weekend Worksheet – III

### MATHS


1. Draw the shapes and use following colours for the edges (lines) use orange colour, faces (sides) use yellow colour and mark the vertex( corners) in black colour.



**CUBE**



**CYLINDER**



**CUBOID**

2. Draw two examples for the following shapes and name it.

- a. Cylinder
- b. Cuboid
- c. Cone
- d. Cube
- e. sphere