



CHENNAI PUBLIC SCHOOL

◆ Anna Nagar ◆ Chennai -600 101

Weekend Worksheet**MATHS**

Class ▶

III

Section ▶

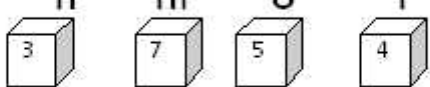
Date ▶


22.08.2014


Name ▶


Roll No. ▶

- I. Four dices are thrown at the same time , each die show a number with place value. Arrange these numbers according to the place value, ascending and descending order, and also write the number name.

1. H Th O T Th H T O
 _____

2. Th H T O Th H T O
 _____

3. O Th T H Th H T O
 _____

4. H O T Th Th H T O
 _____

a. ASCENDING ORDER: _____

b. DESCENDING ORDER: _____

c. NUMBER NAME :

1. _____
 2. _____
 3. _____
 4. _____

II. FIND THE PRODUCT:

1. 198×8


2. 64×32

III. Find the multiplication fact and division fact using the groups shown

1.



2.



D. Draw any two plane shapes and 2 solid shapes and write the number of vertices and sides for each.
