



## CHENNAI PUBLIC SCHOOL

◆ Anna Nagar ◆ Chennai -600 101

**Weekend Worksheet 2014-15****MATHS**Class ▶ III Section ▶ 

Date ▶ 01-08-14

Name ▶ Roll No. ▶ 

1. Identify the next three patterns.



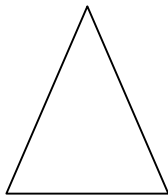
a.




\_\_\_\_\_

b. 100 90 80 70 \_\_\_\_\_.

2. Identify the number of sides in the following figures:




3. Write 'S' if the image is symmetrical and NS if the image is not symmetrical.



4. Tick the correct answer:

i.



Edges: \_\_\_\_\_?

- a. 0      b. 2      c. 1      d. 3

ii.      1      3      6      10      15      \_\_\_\_\_?

- a. 21      b. 19      c. 11      d. 25