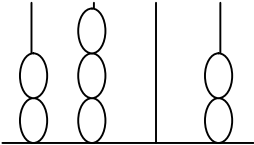
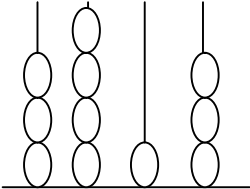


Q:1. Write the price of your school uniform and school bag, then find its face value and place value of each number and write it in expanded form.

Price	Place value	Face value	Expanded form

Q.2. Colour the circles and write the number, number name and make the greatest and smallest number.

Abacus	Number name	Greatest number	Smallest number
			
Abacus	Number name	Greatest number	Smallest number
			

Q:3 Write the numbers from five, six cars number plates and arrange them in ascending order and



also write even, odd numbers





Numbers	Ascending order	Even numbers	Odd numbers

Q:4 Match the followings.

A	B
1 more than 2 6 7 4	2 6 1 9
1000 less than 7 2 7 6	7 2 7 3
100 more than 2 2 4 6	2 6 7 5
1000 more than 6 2 7 3	2 3 4 6
10 less than 2 6 2 9	6 2 7 6

Q:5 Round to the nearest 10 .Then fill yellow colour in those boxes whose tenth place is even number so the Rahul finds his way to books.



17	76	59	43	82
67	28	89	12	22
79	38	44	77	64
19	49	66	88	14
39	63	18	84	

Q:6 . Write the cost of following items and then compare A and B (< , > , =).

A

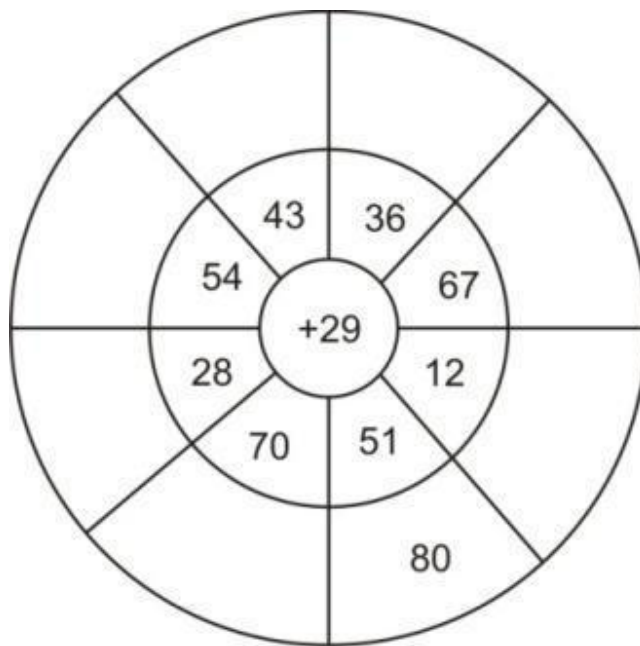


B






Q7.Solve:-




Q9. Write down the cost of different electrical appliances at your home like refrigerator, T.V , microwave etc and add them. Then write the answer using place value system

Q:10 Solve the each problem by using the snack bar.

snacks bar



Price=600/-



Price = 500/-



Price = 300/-



Price = 900



Price = 200

(i) Komal bought an ice cream and popcorn.

How much did she has spend ?

+

(ii) Aryan has 700/- rupees, he bought a coke.

How much does he has left ?

-

(iii) Samira has 1000/- rupees. she bought a pizza.

How much does she has left?

-

(iv) Jack bought a burger and ice cream.

How much money did he has spend?

+



Project:

Make a abacus on chart ,showing place value up to ten thousand.(use waste material and make it creative)