


**Bal Bharati Public School, Pusa Road Campus, New Delhi**  
**Session 2012-2013**


Worksheet No. 8

Subject : Maths

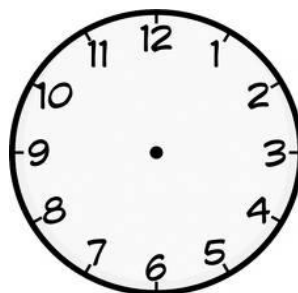
Name ..... Date : ..... Class/sec: III \_\_\_\_

**Q1. Draw the hands to show the time .**


quarter past 5



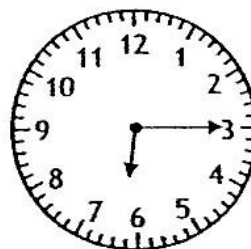


quarter to 8



10 : 10



1 : 45

**Q2 . Write the time under the clocks in words and in figures .**

\_\_\_\_\_

\_\_\_\_\_

**Q3. Fill in the blanks so that both sides become equal .**

a ) 2 l = \_\_\_\_\_ ml + \_\_\_\_\_ ml

b ) 1Kg = \_\_\_\_\_ g + \_\_\_\_\_ g

c ) 200 ml + 800 ml = \_\_\_\_\_ ml

d ) 100 ml + \_\_\_\_\_ ml = 1000 ml

e ) 4kg 700 g = \_\_\_\_\_ g

**Q3 Match the time .**

- |          |                  |
|----------|------------------|
| a) 3:45  | 20 minutes to 5  |
| b) 10:30 | quarter past 9   |
| c) 4:40  | quarter to eight |
| d) 9:15  | quarter to 4     |
| e) 7:45  | half past ten    |

**Q4. Name two-**

- a) months having 30 days. \_\_\_\_\_ , \_\_\_\_\_  
b) months ending with -ber \_\_\_\_\_ , \_\_\_\_\_

**Q5. Sahil sold 20kg 700 g wheat and 36kg 600g rice . Which item did he sell more and how much more?**

**Q6. A jar contains 2l 150 ml of juice, 3 l 680ml more of juice was added to it. How much juice is there in the jar now?**

**Q7. Mayank goes to school by bus. It takes 30 minutes to reach school from his home. His bus starts at 7.30am. What time does he reaches the school?**

**Q8. Arrange and find the sum.**

- a) 130 kg 600g and 245 kg 20 g                      b) 180l 40ml and 15l 40ml