

**BAL BHARATI PUBLIC SCHOOL, GRH MARG (PUSA ROAD) NEW DELHI****MATHS COMPREHENSIVE ASSESMENT TEST WORKSHEET NO-14**

Class III

Session 2013-14

Q1 Fill in the blanks.

a)  $6 + \underline{\quad} = 10$

b)  $\underline{\quad} + 7 = 10$

c)  $8 + \underline{\quad} = 10$

d)  $9 + 8 = \underline{\quad}$

e)  $9 + 7 = \underline{\quad}$

f)  $8 + 8 = \underline{\quad}$

g)  $9 + 9 = \underline{\quad}$

h)  $72 + \underline{\quad} = 63 + \underline{\quad}$

i)  $76 + 13 = \underline{\quad}$

j)  $44 + 36 = \underline{\quad}$

k)  $0 + \underline{\quad} = 81$

l)  $236 + 1 = \underline{\quad}$

m)  $0 + 16 = \underline{\quad}$

n)  $15 + \underline{\quad} = 25$




o)  $859 + \underline{\quad} = 959$

Q2 Arrange and add the following:

A)  $3649 + 2357$

B)  $879 + 3098$

C)  $6758 + 2079$



Q3 If you add me to myself & then add 2 you get 10. Who am I? \_\_\_\_\_

Q4 The sum of two numbers is 60. If one of the numbers is 20, find the second number?

\_\_\_\_\_

Q5. Radha has 615 toffees. She has got 125 more; how many toffees does she have in all?

\_\_\_\_\_

Q6. A fruit seller sells 345 bananas, 89 apples and 239 oranges in a day. How many fruits does he sell in all?

\_\_\_\_\_

Q7. Fill ups:

- a)  $48 \times 100 = \underline{\quad}$   
 b)  $60 \times 70 = \underline{\quad}$   
 c)  $90 \times 80 = \underline{\quad}$   
 d)  $93 \times \underline{\quad} = 930$   
 e)  $60 \times \underline{\quad} = 6000$   
 f)  $275 \times \underline{\quad} = 0$   
 g)  $42 \times \underline{\quad} = 42$

Q8. Multiply:

**2385**

**X 4**

\_\_\_\_\_

**7089**

**X 8**

\_\_\_\_\_

**483**

**X 62**

\_\_\_\_\_

**23**

**X 49**

\_\_\_\_\_

Q9. A box contains 25 apples; how many apples are there in 100 boxes?

\_\_\_\_\_

Q10 A pencil box has 20 pencils. How many pencils do we have in 4 boxes?

\_\_\_\_\_