




Q1. It's vacation time and you are planning to visit a hill station with your family. You go shopping with your Mom and Dad. Add up the price of different items to see if you can afford them or not. Your Mom tells you that you cannot spend more than Rs 3000.



₹ 600



₹ 575



₹ 250



₹ 780



₹ 125



₹ 2250

1. How much would it cost you to buy a baseball hat, scarf and socks?

---

2. What will be cost of shoes, christmas hat and jacket?

---

3. What would you buy? Why?

Items in question (1) or (2)

---