
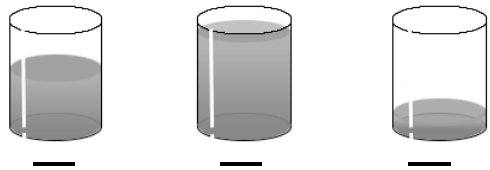


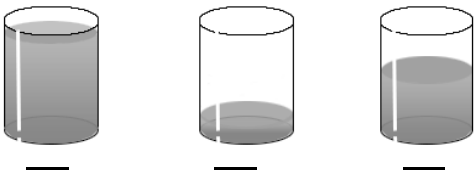





WORK SHEET No. 2

Date _____

Month _____

Competency: Understanding the Basic Concept**1. Which container holds the most liquid? Tick the correct figure:**

| | |
|---|---|
| <p>A) Which teapot contains the most tea?</p>  <p>_____</p> | <p>B) Which glass holds the most juice?</p>  <p>_____</p> |
| <p>C) Which mug holds the most cocoa?</p>  <p>_____</p> | <p>D) Which bottle holds the most bubble bath?</p>  <p>_____</p> |
| <p>E) Which glass holds the least juice?</p>  <p>_____</p> | <p>F) Which bottle holds the most bubble bath?</p>  <p>_____</p> |
| <p>G) Which glass holds the most juice?</p>  <p>_____</p> | <p>H) Which bottle holds the least bubble bath?</p>  <p>_____</p> |

Teacher's Signature

Parent's Signature