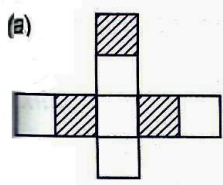
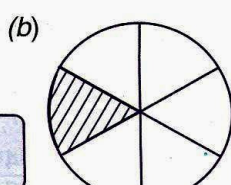
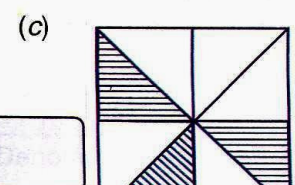


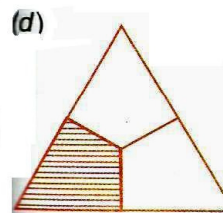
THE AIR FORCE SCHOOL
CLASS III MATHS HW WORKSHEET
SUBMISSION DATE: 6 DEC, 2013

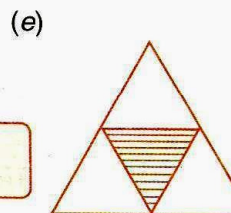
For each of the following write the fraction showing the unshaded parts :

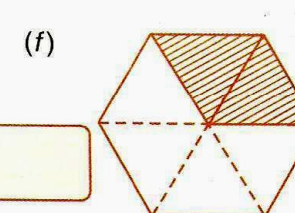
(a) 

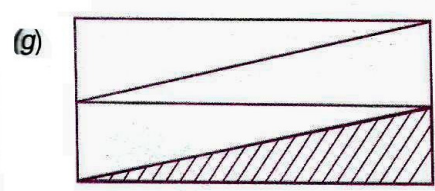
(b) 


(c) 

(d) 

(e) 

(f) 

(g) 



Write the fraction for each of the following fractional numbers. The first one is **done**.

Fractional Number	Fraction	Fractional Number	Fraction
(a) three - sevenths	$\frac{3}{7}$	(b) one - fifth	<input type="text"/>
(c) three - sixths	<input type="text"/>	(d) five - sixths	<input type="text"/>
(e) one - eighth	<input type="text"/>	(f) seven - tenths	<input type="text"/>
(g) six - ninths	<input type="text"/>	(h) nine - elevenths	<input type="text"/>
(i) eight - twelfths	<input type="text"/>	(j) twelve - seventeenths	<input type="text"/>