

Topic : Can we share?

Date _____

WORK SHEET No. 1

Month _____

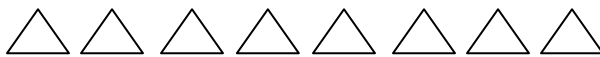
Competency: Formation of Numbers**1. Make equal groups and write the division facts for the following;**

a) Make equal groups of 4




$$\square \div \square = \square$$

a) Make equal groups of 2



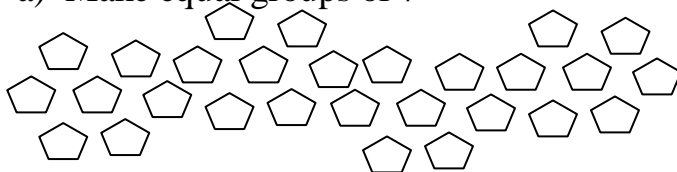
$$\square \div \square = \square$$

a) Make equal groups of 6




$$\square \div \square = \square$$

a) Make equal groups of 7



$$\square \div \square = \square$$

a) Make equal groups of 5



$$\square \div \square = \square$$

Teacher's Signature

Parent's Signature