

**CLASS: IV**










**ENVIRONMENTAL SCIENCE**

**WORKSHEET-REVISION 2**

**Q1: Match the following:**

We Eat Plants Name: \_\_\_\_\_

Draw lines showing which plant part the picture is:

Roots		
Stems		
Flowers		
Seeds		
Leaves		

http://www.studiestoday.com

**Q2: Make the proper words and encircle them**



**Q3: Give one word**

- The process by which the plants make their own food \_\_\_\_\_
- The green coloured pigment present in the leaves \_\_\_\_\_
- Tiny pores present on the lower side of the leaf that help the plant to breathe \_\_\_\_\_

Q4:

My Plant Name: \_\_\_\_\_

Draw a plant with all of its parts. Be sure to include what a plant needs to grow.

www.studiestoday.com