

**Bal Bharati Public School, Pusa Road Campus, New Delhi**  
**Session 2012-2013**

Worksheet No. 7

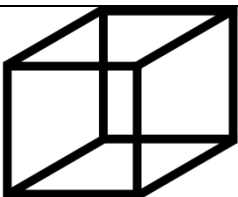




Subject : Maths

Name ..... Date : ..... Class/sec: II \_\_\_\_

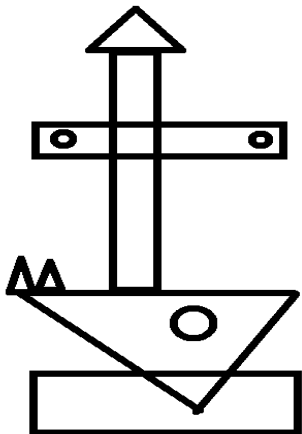
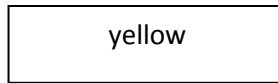
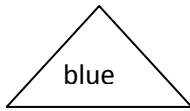
1. Fill in the blanks:

- A joker's cap is in the shape of a \_\_\_\_\_.
- A \_\_\_\_\_ has one curved and a plane surface.
- Opposite faces of a \_\_\_\_\_ are equal.
- A matchbox is an example of a \_\_\_\_\_.
- A rectangle has \_\_\_\_\_ corners.

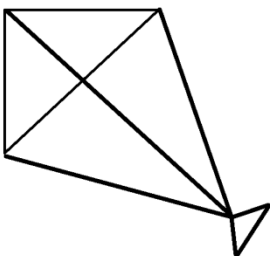
2. Match the objects with the correct shape:

COLUMN A	COLUMN B
Cone	
Cube	
rectangle	
Triangle	
Circle	

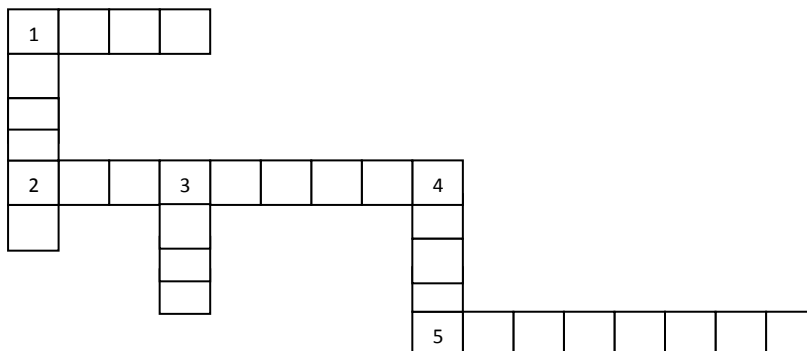
3. Count and write the number of different shapes in each figure. Also colour the shapes as directed:



3. Count and write the number of triangles in the given figure:



4. Solve the crossword:



Across:

1. Another word for equal
2. My opposites sides are equal
5. I have three corners

down:

1. My all sides are equal
3. An example of cone
4. A cube has \_\_\_\_ corners.