

AMBE SCHOOL, Manjalpur, Vadodara

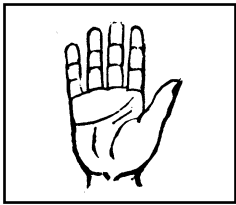
Class - II  
L - 6

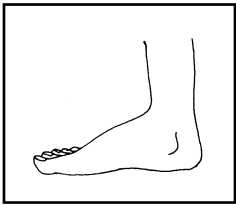
Practice Worksheet      Year : 2013 - 14  
Subject : Maths


Marks : 20

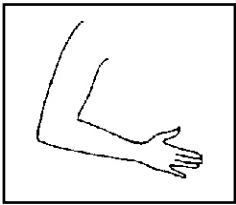
**Q.1 Write the name of measuring length. (4)**

(1)









**Q-2 Decide and write 'm' or 'cm' according. (6)**

- (1) Ladder - \_\_\_\_\_
- (2) Book - \_\_\_\_\_
- (3) Saree - \_\_\_\_\_
- (4) Pencil - \_\_\_\_\_
- (5) Paint Brush - \_\_\_\_\_
- (6) Height - \_\_\_\_\_

**Q.3 Write missing word. (6)**

- (1) C \_ \_ T \_ \_ M \_ \_ T \_ \_ E
- (2) H \_ \_ D \_ \_ P \_ \_ N
- (3) \_ \_ U \_ \_ I T
- (4) F \_ \_ O \_ \_ S \_ \_ \_ N
- (5) M \_ \_ T \_ \_ E
- (6) M \_ \_ A \_ \_ U R \_ \_ S

**Q.4 Matching. (2)**

- (1) Hand Span                      (a) carpet
- (2) Footspan                      (b) Tade
- (3) Cubit                      (c) Terrace
- (4) Pace                      (d) Blackboard

**Q.5 Puzzle. (2)**

- Down
- (1) We want to measure saree
- (2) We want to know the length and breadth.
- Cross
- (1) We want to measure paint brush.
- (2) When we to know longness of a land.

(2)

(4)

L

M

N

T

A

O

S

(1)

(3)

C

N

I

E

R

E

R