

## CHAPTER 14

### BIRDS COME BIRDS GO

Ques.1 Write in expanded form?

विस्तृत रूप में लिखो।

a)  $37 = 30 + \boxed{\phantom{00}}$

b)  $74 = \boxed{\phantom{00}} + 4$

Ques.2 Write the value and draw beads on the abacus of the encircled digits.

गिनती सिखाने वाले में गोलाकृत संख्याओं के दाने बनाओ।

a)  $\textcircled{4}7$

T      O

--	--

b)  $9\textcircled{6}$

T      O

--	--

Ques.3 Look at the key for place values and write down the sums.

खानों में स्थानीय मान भरें तथा योगफल लिखें।

T	U
☆	○

<table border="1" style="width: 100px; height: 100px; border-collapse: collapse;"> <tr> <td style="width: 33%; text-align: center;">☆ ☆ ☆</td> <td style="width: 33%; text-align: center;">○ ○</td> </tr> </table>	☆ ☆ ☆	○ ○	+	<table border="1" style="width: 100px; height: 100px; border-collapse: collapse;"> <tr> <td style="width: 33%; text-align: center;">☆ ☆ ☆</td> <td style="width: 33%; text-align: center;">☆ ○ ○ ○</td> </tr> </table>	☆ ☆ ☆	☆ ○ ○ ○	=	<table border="1" style="width: 100px; height: 100px; border-collapse: collapse;"> <tr> <td style="width: 100%; height: 100%;"></td> </tr> </table>	
☆ ☆ ☆	○ ○								
☆ ☆ ☆	☆ ○ ○ ○								



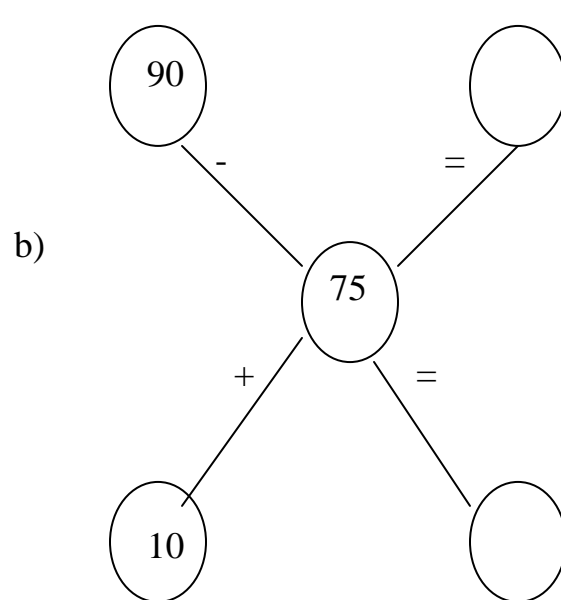
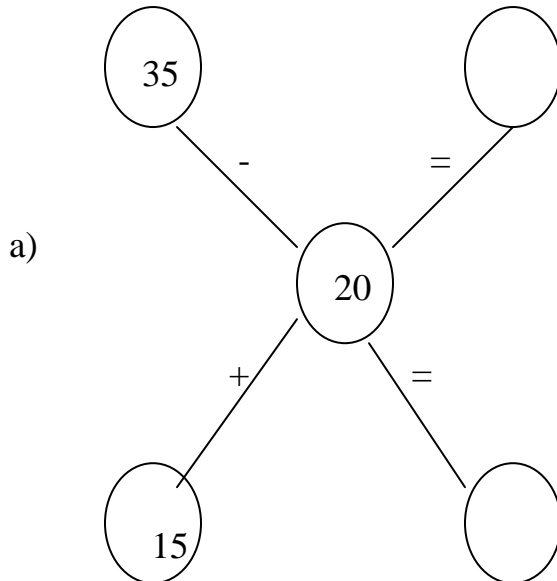
Ques.4 Colour the tens

दहाई वाली संख्याओं में रंग भरें।

16	5	12
9	30	4
15	2	75

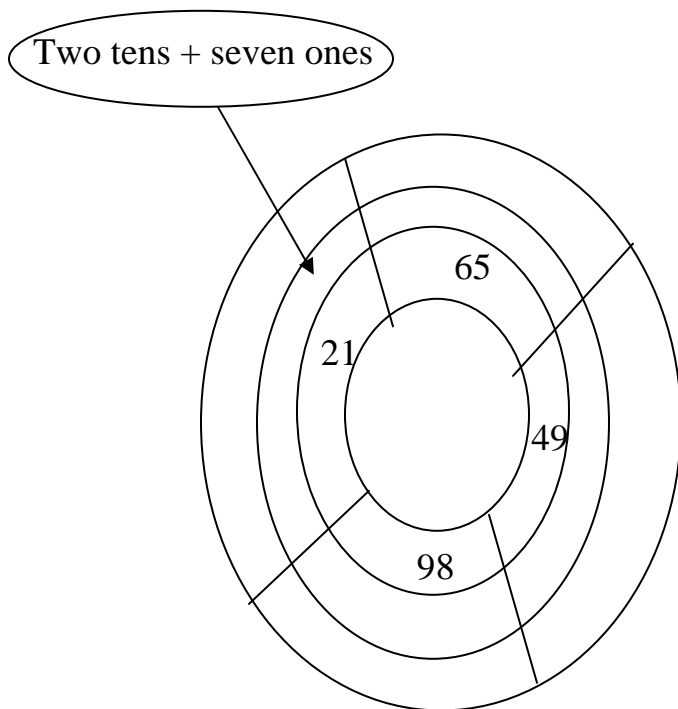
Ques.5 Complete the following.

निम्न को पूरा करें:-



Ques.6 Write ones and tens and also colour the picture.

इकाई तथा दहाईयों को लिखें तथा तस्वीरों में रंग भरें:-



Ques.7 Put correct symbol (+, -)

सही चिन्ह भरो:-

a)  $65 \square 50 = 15$

b)  $40 \square 30 = 70$

Ques.8 picture subtraction

चित्र देखकर घटाओ:-

$$\begin{array}{r}
 \text{9 circles} \\
 - \text{4 circles} \\
 \hline
 \text{5 circles}
 \end{array}$$



a)  -  = 


b)   
 -  = 

Ques.9 Solve –  
 हल करो:-

a)  $38 + 45 = \boxed{\phantom{00}}$

b)  $76 - 47 = \boxed{\phantom{00}}$

Ques.10 complete:-  
 पूरा करो:-



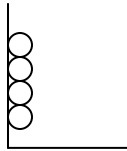
**ANSWERS**

Ans.1

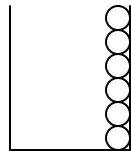
- a) 7  
b) 70

Ans.2

a)



b)

Ans.3       $32 + 43 = 75$ 

Ans.4      Do it your self

Ans.5

$$\begin{array}{rclclcl} \text{a)} & 35 & - & 20 & = & 35 \\ & 15 & + & 20 & = & 15 \end{array}$$

$$\begin{array}{rclclcl} \text{b)} & 90 & - & 15 & = & 85 \\ & 10 & + & 15 & = & 15 \end{array}$$

Ans.6

$$65 = 6 \text{ tens} + 5 \text{ ones}$$

$$49 = 4 \text{ tens} + 9 \text{ ones}$$

$$98 = 9 \text{ tens} + 8 \text{ ones}$$

Ans.7

a) –

b) +

Ans.8

a)  $8 - 3 = 5$

b)  $6 - 2 = 4$

Ans.9

a) 83

b) 29

Ans.10

a) 37

b) 74

c) 61

d) 10

e) 109

f) 99