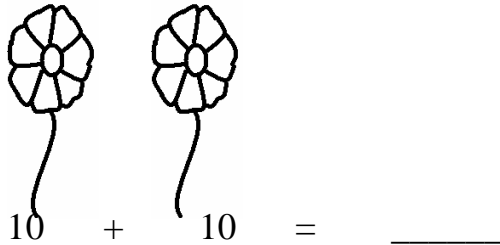


CHAPTER 4

COUNTING IN TENS

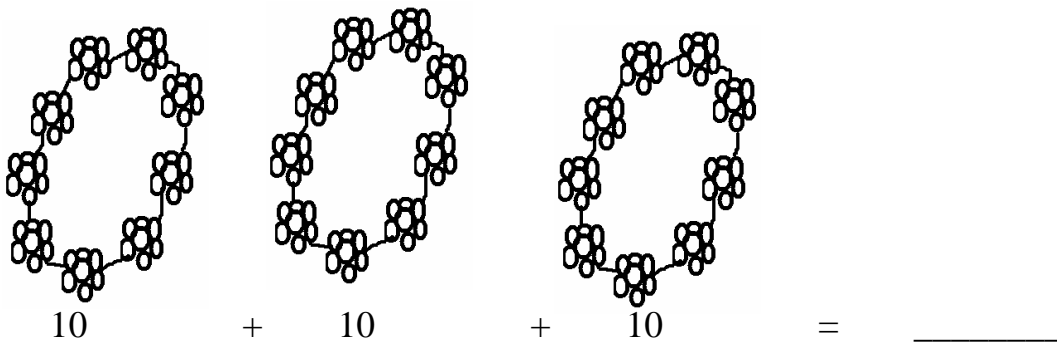
Ques.1 How many in petals of the flowers:

फूलों में कितनी पंखुडियाँ दहाई अंक में है:-



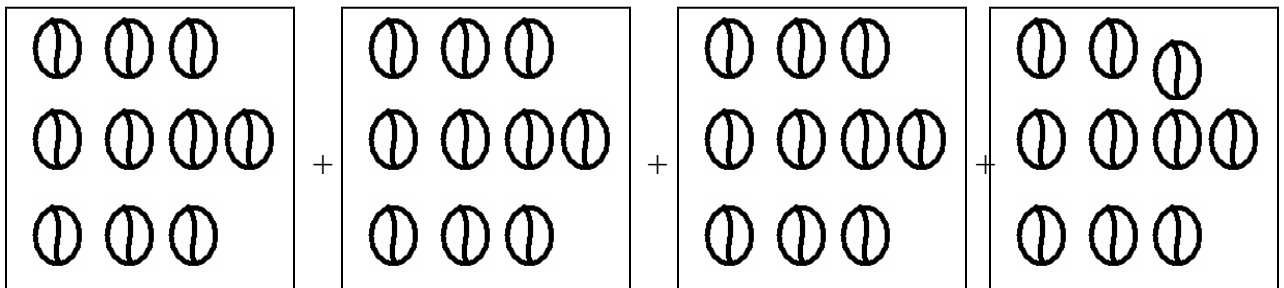
Ques.2 How many pearls in tens in the garland?

माला में कितने मोती दहाई अंक में है ।

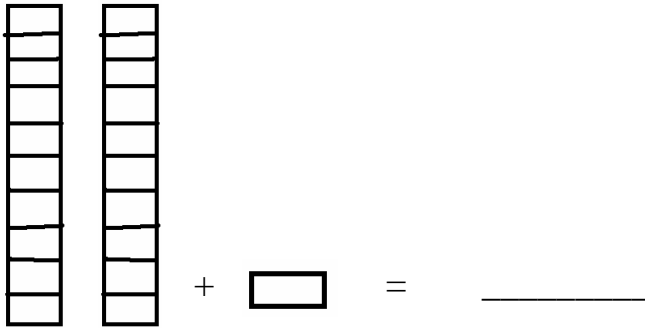


Ques.3 How many balls in the box?

बॉक्स में कितने दहाई गेंदे हैं ।



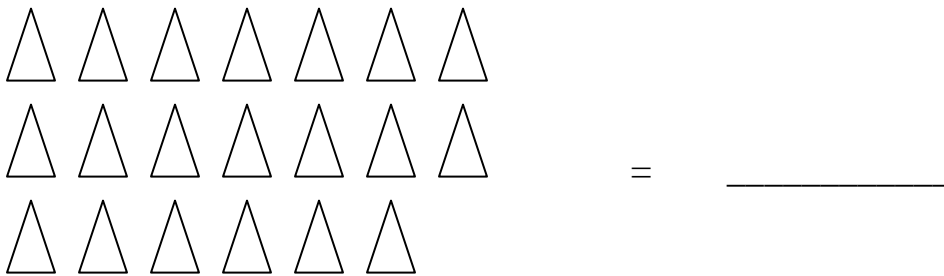
Ques.4



$$\begin{array}{l} 2 \text{ tens} + 1 \text{ ones} \\ \text{दहाई} \quad \text{इकाई} \end{array} = \underline{\hspace{2cm}}$$

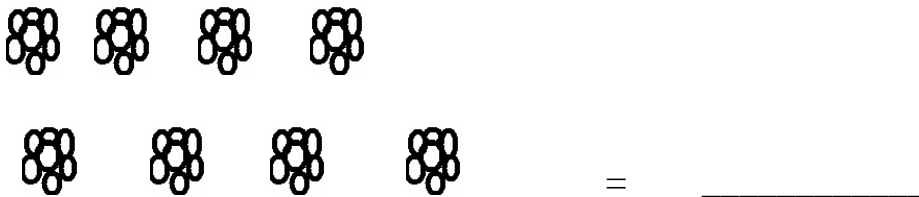
Ques.5 How many tens are count it in the figure.

कितने दहाई है? गिनो।

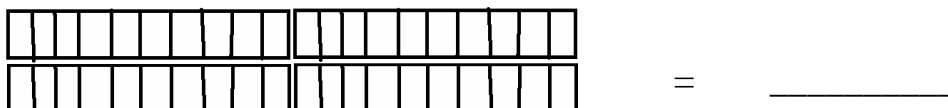


Ques.6 How many flowers are count it in tens.

फूल कितने है, दहाई मे गिनो।

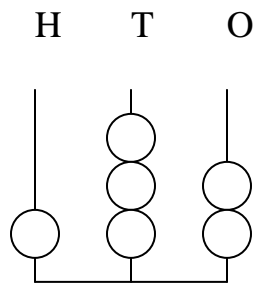


Ques.7

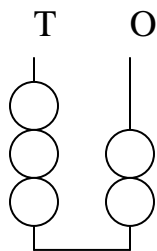


2 tens + 2 tens

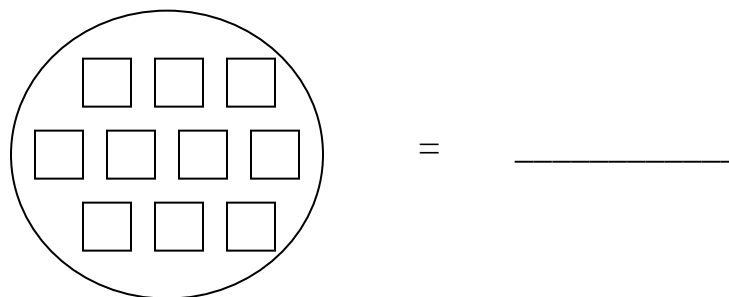
Ques.8



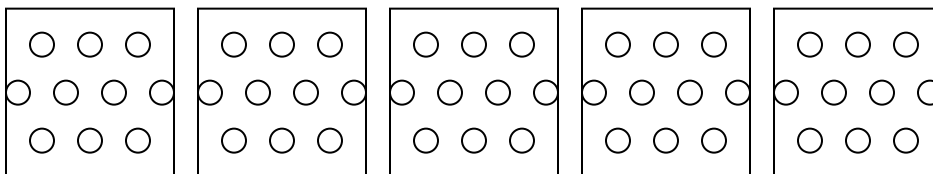
Ques.9



Ques.10 How many 10 boxes in the circle.
गोले में कितने १० बाक्स है?



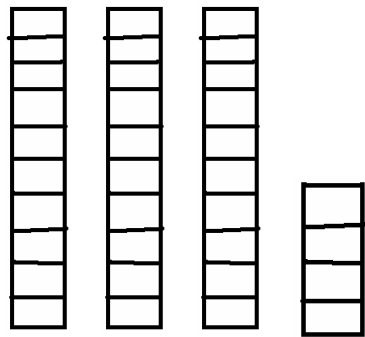
Ques.11 How many 10 circle in the box.
दहाई अंको में गिनो।



10 + 10 + 10 + 10 + 10 = _____

Ques.12 Count it in tens.


दहाई में गिनो।



$$10 + 10 + 10 + 5 = \underline{\hspace{2cm}}$$


Ques.13 Count it in tens.

दहाई में गिनो।



Ques.14 How many leaves count it in tens.

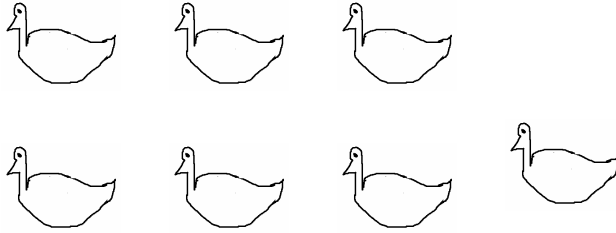
पत्तियाँ कितनी हैं दहाई में गिनो?



$$= \underline{\hspace{2cm}}$$

Ques.15 How many ducks count it tens.

कितने बत्तख है दहाई में गिनो?



ANSWERKEY

1. 20
2. 30
3. 40
4. 21
5. 20
6. 10
7. 40
8. 132
9. 32
10. 10
11. 50
12. 35
13. 70
14. 20
15. 10