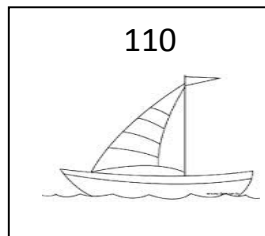
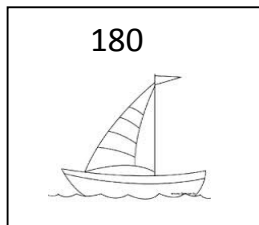
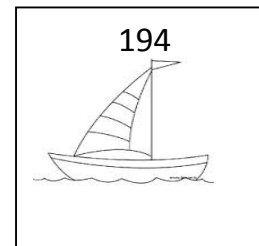
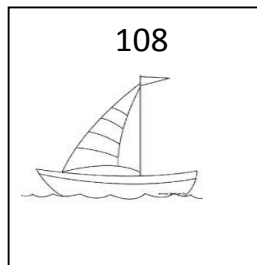
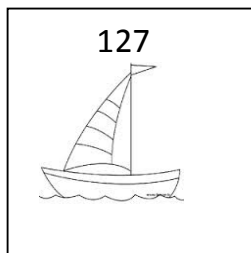


CLASS II MATHS HW WORKSHEETSUBMISSION DATE: 18 JULY 2014

## TOPIC—NUMBER FUN

Q1. Six boats participated in a race. Each boat has been given a number as mentioned in the boxes.



The result of the race is in the following riddles. Solve them by identifying the number given to each boat.

1. First position- The number name of the boat is one hundred eighty.....
2. Second position- The number on the boat ends with an odd digit.....
3. Third position - The expanded form of the number is 1 hundred+ 8 ones  
.....
4. Fourth position - The number on the boat comes after 109.....
5. Fifth position - The boat with the greatest number.....

6. From the first place to last, in what order did they cross the finish line?  
Write their respective numbers in the blanks.

..... , ..... , ..... , ..... , .....