

**WORK SHEET NO. 4**

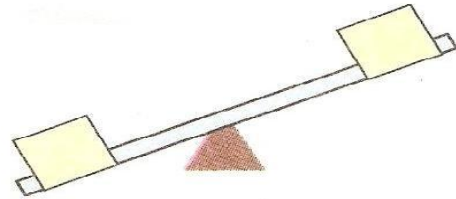
Date \_\_\_\_\_

Month \_\_\_\_\_

**Competency: Understanding Basic Concepts**

1. Which of the things will make the see – saw go up and go down? Write the correct number in the box.

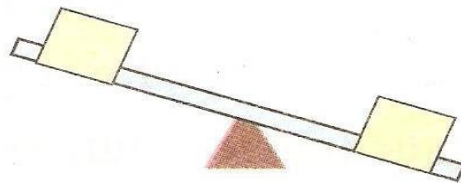
1



1




2



1




2



1




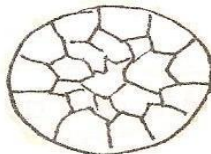
2



1



2



Tennis Ball

Football

Teacher's signature

Parent's signature