











THE AIRFORCE SCHOOL
CLASS II MATHS HW WORKSHEET
SUBMISSION DATE: 10 October 2014

Q1 Help me find my bus. Colour the correct bus with the same colour as my shirt.

<u>Blue</u>	<u>Yellow</u>	<u>Red</u>	<u>Pink</u>	<u>Green</u>
				
500	290	499	699	900
				
10 more than 489	100 less than 799	10 less than 300		
				
number after 499		1 more than 899		

Q 2

Colour the numbers in which the place value of

3 is 300.	430	372	503	236
8 is 80.	784	805	608	85
9 is 900.	790	901	109	970
3 is 3.	413	532	346	23
1 is 100.	713	841	178	112
5 is 50.	125	509	352	50
7 is 7.	567	570	705	507
6 is 600.	634	561	556	600
3 is 30.	300	344	239	434
6 is 6.	326	516	961	607