

CLASS: II

NAME: _____

DATE: _____

Q1. Write the next 5 numbers.

245					
314					
108					
190					
299					
300					
151					
111					

Q2. Write the previous 5 numbers.

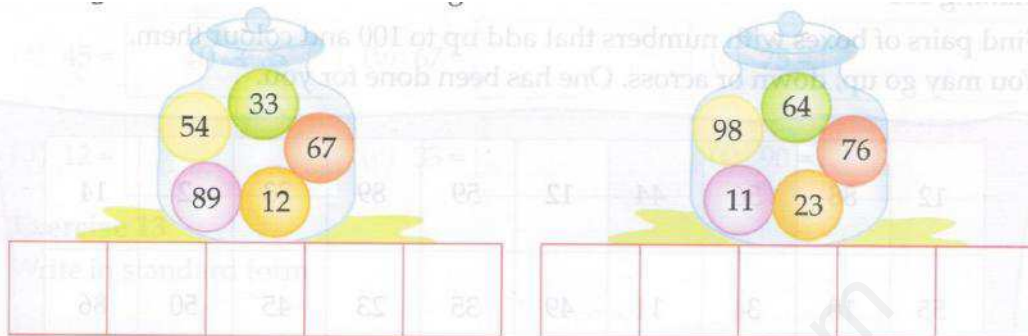
					291
					304
					87
					143
					200
					99
					130
					312

CLASS: II

NAME: _____

DATE: _____

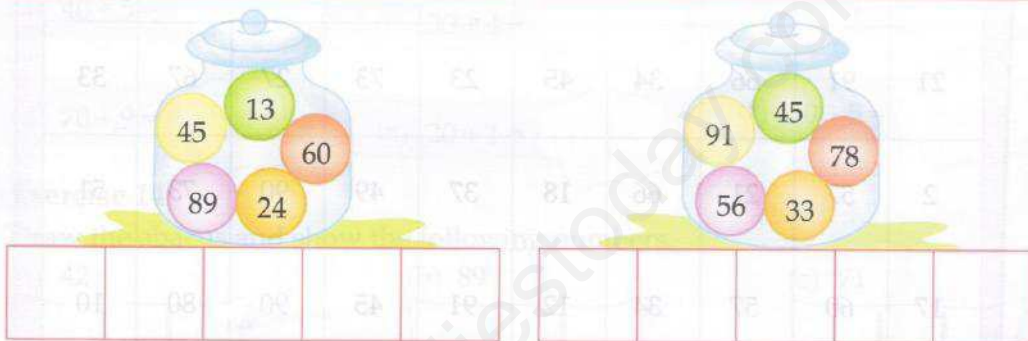
Q1. Arrange the numbers in increasing order.



Two jars are shown, each containing five numbered balls. Below each jar is a row of five empty boxes for the answer.

Jar 1: 54, 33, 67, 89, 12

Jar 2: 98, 64, 76, 11, 23



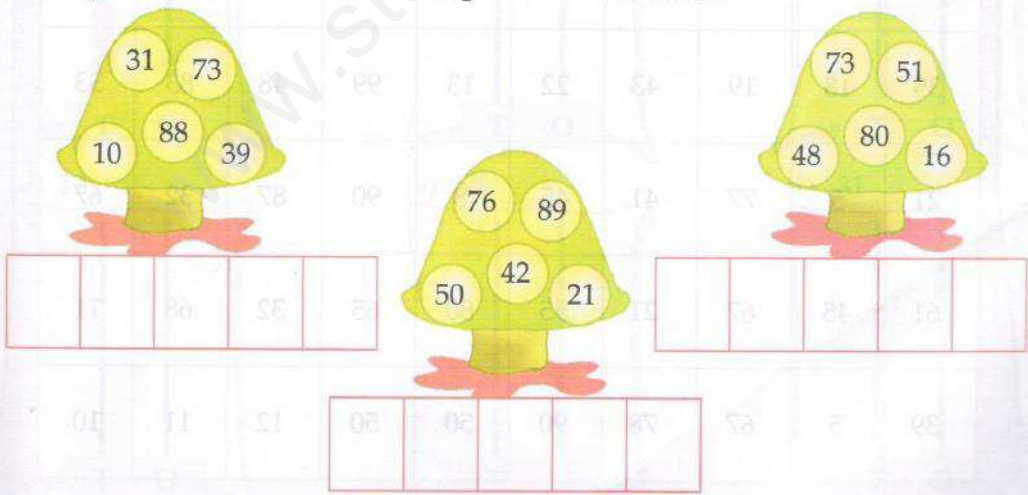
Two more jars are shown, each containing five numbered balls. Below each jar is a row of five empty boxes for the answer.

Jar 3: 45, 13, 60, 89, 24

Jar 4: 91, 45, 78, 56, 33

Exercise 10

Arrange the numbers in descending order in the boxes.



Three mushrooms are shown, each containing five numbered circles. Below each mushroom is a row of five empty boxes for the answer.

Mushroom 1: 31, 73, 10, 88, 39

Mushroom 2: 76, 89, 50, 42, 21

Mushroom 3: 73, 51, 48, 80, 16