

REVISION WORKSHEET - 1

Name : _____

Subject : *E.V.S*

Class : II Section: _____

Topic : Our Environment & Parts of plants

Date : _____

T. Sign : _____

Q.1. The picture shown below has a number of things in it. Some are living and the others are non-living. Point out which ones are living and which ones are non-living? Write them in their correct column.



LIVING THINGS			
NON – LIVING THINGS			

Q.2. Encircle the correct answers

- Human beings depend on plants and animals for their (food / bird)
- Plants breathe through small holes in their (leaves / flowers)
- Animals kill other animals for (fun / food)
- A puppy grows into a (boy / dog)
- A new plants grow from (branch / seeds)

Q3. Fill in the blanks by choosing the correct option.

fruits, Jasmine, natural things, aeroplane, absorb
--

- a) Seeds are found inside most _____ .
- b) _____ is a man made things that flies.
- c) _____ is a flowering plant.
- d) Roots _____ water and mineral from the soil.
- e) The things that occur in nature are called_____.

Q.4. Name them.

- a) A plant that changes is direction according to sun. _____
- b) I make food for the plants. _____
- c) The most colourful part of the plant . _____
- d) A fruit with one seed. _____
- e) I give birth to my young ones by laying eggs. _____

Q.5. Match the following.


- | | |
|--------------------------|--------|
| a) horse | wings |
| b) fish | papaya |
| c) fruit with many seeds | fins |
| d) birds | roots |
| e) fixes the plant | legs |

Q.6. Write the difference between living and non living things


LIVING THINGS	NON LIVING THINGS
1.	1.
2.	2.
3.	3.

Q.7. Draw and colour the following and name them.


NATURAL THING



MAN MADE THING



LIVING THING



NON-LIVING THING

