

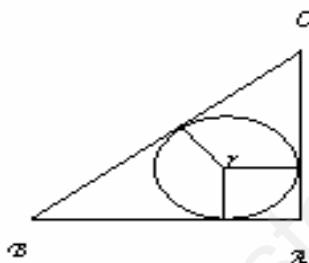
## UNIT-8

**SIMILAR TRIANGLES**

**Geometry is the right foundation of all painting, I have decided to teach its rudiments and principles to all youngsters eager for art.**

1. ABC is a right-angled triangle, right-angled at A. A circle is inscribed in it. The lengths of the two sides containing the right angle are 6cm and 8 cm. Find the radius of the in circle.

(Ans:  $r=2$ )



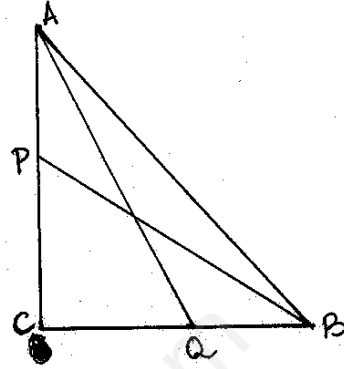
**Ans:**  $BC = 10\text{cm}$   
 $y + z = 8\text{cm}$   
 $x + z = 6\text{cm}$   
 $x + y = 10$   
 $\Rightarrow x + y + z = 12$   
 $z = 12 - 10$   
 $z = 2\text{ cm}$   
 $\therefore \text{radius} = 2\text{cm}$

2. ABC is a triangle. PQ is the line segment intersecting AB in P and AC in Q such that PQ parallel to BC and divides triangle ABC into two parts equal in area. Find BP: AB.

**Ans:** Refer example problem of text book.

3. In a right triangle ABC, right angled at C, P and Q are points of the sides CA and CB respectively, which divide these sides in the ratio 2: 1.

Prove that  $9AQ^2 = 9AC^2 + 4BC^2$   
 $9BP^2 = 9BC^2 + 4AC^2$   
 $9(AQ^2 + BP^2) = 13AB^2$



**Ans:** Since P divides AC in the ratio 2 : 1

$$CP = \frac{2}{3} AC \quad QC = \frac{2}{3} BC$$

$$AQ^2 = QC^2 + AC^2$$

$$AQ^2 = \frac{4}{9} BC^2 + AC^2$$

$$9AQ^2 = 4BC^2 + 9AC^2 \quad \dots\dots\dots (1)$$

$$\text{Similarly we get } 9BP^2 = 9BC^2 + 4AC^2 \quad \dots\dots\dots (2)$$

$$\text{Adding (1) and (2) we get } 9(AQ^2 + BP^2) = 13AB^2$$

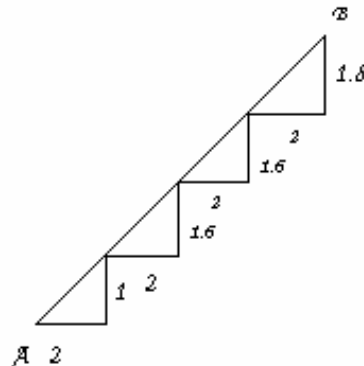
4. P and Q are the mid points on the sides CA and CB respectively of triangle ABC right angled at C. Prove that  $4(AQ^2 + BP^2) = 5AB^2$

### Self Practice

5. In an equilateral triangle ABC, the side BC is trisected at D. Prove that  $9AD^2 = 7AB^2$

### Self Practice

6. There is a staircase as shown in figure connecting points A and B. Measurements of steps are marked in the figure. Find the straight distance between A and B.  
 (Ans:10)



**Ans:** Apply Pythagoras theorem for each right triangle add to get length of AB.

7. Find the length of the second diagonal of a rhombus, whose side is 5cm and one of the diagonals is 6cm.  
(Ans: 8cm)

**Ans:** Length of the other diagonal = 2(BO)

where BO = 4cm

∴ BD = 8cm.

8. Prove that three times the sum of the squares of the sides of a triangle is equal to four times the sum of the squares of the medians of the triangle.

**Ans:** To prove  $3(AB^2 + BC^2 + CA^2) = 4(AD^2 + BE^2 + CF^2)$

In any triangle sum of squares of any two sides is equal to twice the square of half of third side, together with twice the square of median bisecting it.

If AD is the median

$$AB^2 + AC^2 = 2 \left\{ AD^2 + \frac{BC^2}{4} \right\}$$

$$2(AB^2 + AC^2) = 4AD^2 + BC^2$$

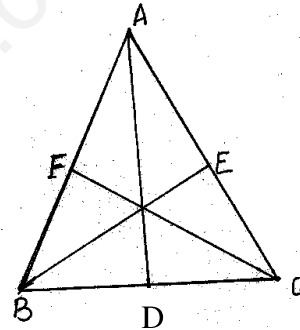
Similarly by taking BE & CF as medians we get

$$\Rightarrow 2(AB^2 + BC^2) = 4BE^2 + AC^2$$

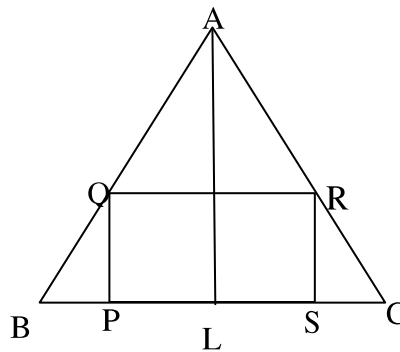
$$\& 2(AC^2 + BC^2) = 4CF^2 + AB^2$$

Adding we get

$$\Rightarrow 3(AB^2 + BC^2 + AC^2) = 4(AD^2 + BE^2 + CF^2)$$



9. ABC is an isosceles triangle in which  $AB=AC=10$ cm.  $BC=12$ . PQRS is a rectangle inside the isosceles triangle. Given  $PQ=SR= y$  cm,  $PS=QR=2x$ . Prove that  $x = 6 - \frac{3y}{4}$ .



**Ans:** AL = 8 cm

$\Delta BPQ \sim \Delta BAL$

$$\Rightarrow \frac{BQ}{PQ} = \frac{BL}{AL}$$

$$\Rightarrow \frac{6-x}{y} = \frac{6}{8}$$

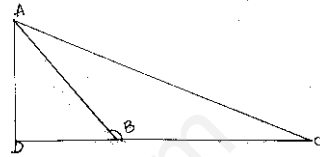
$$\Rightarrow x = 6 - \frac{3y}{4}$$

Hence proved

10. If ABC is an obtuse angled triangle, obtuse angled at B and if  $AD \perp CB$

Prove that  $AC^2 = AB^2 + BC^2 + 2BC \times BD$

**Ans:**  $AC^2 = AD^2 + CD^2$   
 $= AD^2 + (BC + BD)^2$   
 $= AD^2 + BC^2 + 2BC \cdot BD + BD^2$   
 $= AB^2 + BC^2 + 2BC \cdot BD$



11. If ABC is an acute angled triangle, acute angled at B and  $AD \perp BC$

prove that  $AC^2 = AB^2 + BC^2 - 2BC \times BD$

**Ans:** Proceed as sum no. 10.

12. Prove that in any triangle the sum of the squares of any two sides is equal to twice the square of half of the third side together with twice the square of the median, which bisects the third side.

**Ans:** To prove  $AB^2 + AC^2 = 2AD^2 + 2\left(\frac{1}{2}BC\right)^2$

Draw  $AE \perp BC$

Apply property of Q. No.10 & 11.

In  $\triangle ABD$  since  $\angle D > 90^\circ$

$$\therefore AB^2 = AD^2 + BD^2 + 2BD \times DE \dots(1)$$

$\triangle ACD$  since  $\angle D < 90^\circ$

$$AC^2 = AD^2 + DC^2 - 2DC \times DE \dots(2)$$

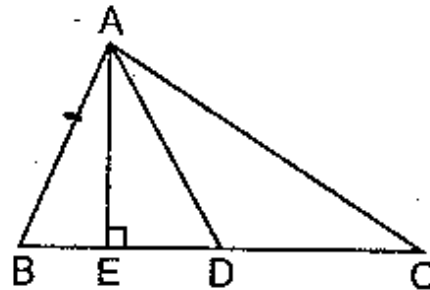
Adding (1) & (2)

$$AB^2 + AC^2 = 2(AD^2 + BD^2)$$

$$= 2\left(AD^2 + \left(\frac{1}{2}BC\right)^2\right)$$

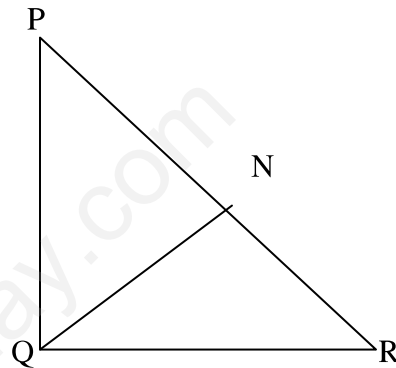
$$\text{Or } AB^2 + AC^2 = 2(AD^2 + BD^2)$$

Hence proved



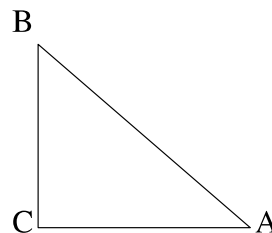
13. If  $A$  be the area of a right triangle and  $b$  one of the sides containing the right angle, prove that the length of the altitude on the hypotenuse is  $\frac{2Ab}{\sqrt{b^4 + 4A^2}}$ .

**Ans:** Let  $QR = b$   
 $A = \text{Ar}(\triangle PQR)$   
 $A = \frac{1}{2} \times b \times PQ$   
 $PQ = \frac{2A}{b} \dots\dots\dots(1)$   
 $\triangle PNQ \sim \triangle PQR$  (AA)  
 $\Rightarrow \frac{PQ}{PR} = \frac{NQ}{QR} \dots\dots\dots(2)$   
 From  $\triangle PQR$   
 $PQ^2 + QR^2 = PR^2$   
 $\frac{4A^2}{b^2} + b^2 = PR^2$   
 $PR = \sqrt{\frac{4A^2 + b^4}{b^2}} = \frac{\sqrt{4A^2 + b^4}}{b}$   
 Equation (2) becomes  
 $\frac{2A}{b \times PR} = \frac{NQ}{b}$   
 $NQ = \frac{2A}{PR}$   
 $NQ = \frac{2Ab}{\sqrt{4A^2 + b^4}}$  Ans



14. ABC is a right triangle right-angled at C and  $AC = \sqrt{3} BC$ . Prove that  $\angle ABC = 60^\circ$ .

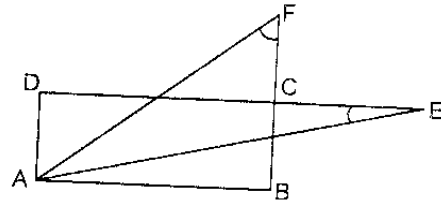
**Ans:**  $\tan B = \frac{AC}{BC}$   
 $\tan B = \frac{\sqrt{3}BC}{BC}$   
 $\tan B = \sqrt{3}$   
 $\Rightarrow \tan B = \tan 60$   
 $\Rightarrow B = 60^\circ$



$\Rightarrow \angle ABC = 60^\circ$   
Hence proved

15. ABCD is a rectangle.  $\triangle ADE$  and  $\triangle ABF$  are two triangles such that  $\angle E = \angle F$  as shown in the figure. Prove that  $AD \times AF = AE \times AB$ .

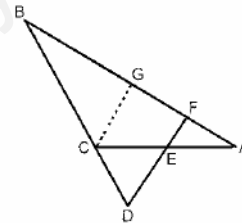
**Ans:** Consider  $\triangle ADE$  and  $\triangle ABF$   
 $\angle D = \angle B = 90^\circ$   
 $\angle E = \angle F$  (given)  
 $\therefore \triangle ADE \cong \triangle ABF$   
 $\frac{AD}{AB} = \frac{AE}{AF}$   
 $\Rightarrow AD \times AF = AB \times AE$   
 Proved



16. In the given figure,  $\angle AEF = \angle AFE$  and E is the mid-point of CA. Prove that

$$\frac{BD}{CD} = \frac{BF}{CE}$$

**Ans:** Draw  $CG \parallel DF$   
 In  $\triangle BDF$   
 $CG \parallel DF$   
 $\therefore \frac{BD}{CD} = \frac{BF}{GF}$  .....(1) BPT  
 In  $\triangle AFE$   
 $\angle AEF = \angle AFE$   
 $\Rightarrow AF = AE$   
 $\Rightarrow AF = AE = CE$ .....(2)



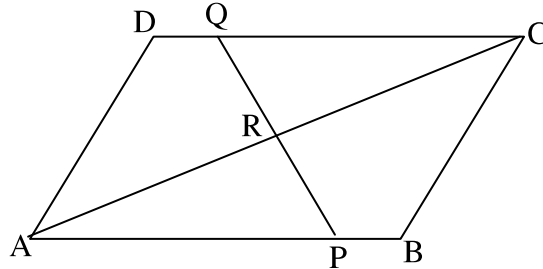
In  $\triangle ACG$   
 E is the mid point of AC  
 $\Rightarrow FG = AF$

$\therefore$  From (1) & (2)

$$\frac{BD}{CD} = \frac{BF}{CE}$$

Hence proved

17. ABCD is a parallelogram in the given figure, AB is divided at P and CD and Q so that  $AP:PB=3:2$  and  $CQ:QD=4:1$ . If PQ meets AC at R, prove that  $AR=\frac{3}{7}AC$ .



**Ans:**  $\triangle APR \sim \triangle CQR$  (AA)

$$\Rightarrow \frac{AP}{CQ} = \frac{PR}{QR} = \frac{AR}{CR}$$

$$\Rightarrow \frac{AP}{CQ} = \frac{AR}{CR} \quad \& \quad AP = \frac{3}{5}AB$$

$$\Rightarrow \frac{3AB}{5CQ} = \frac{AR}{CR} \quad \& \quad CQ = \frac{4}{5}CD = \frac{4}{5}AB$$

$$\Rightarrow \frac{AR}{CR} = \frac{3}{4}$$

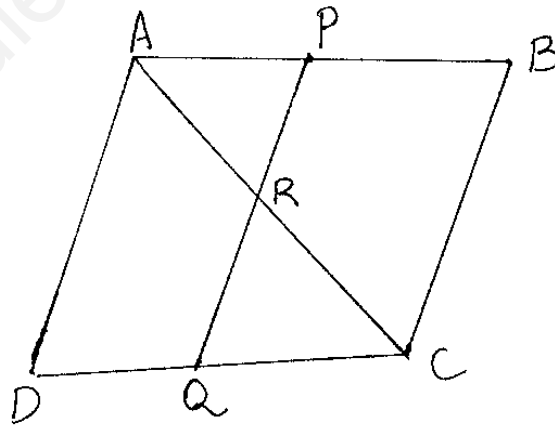
$$\Rightarrow \frac{CR}{AR} = \frac{4}{3}$$

$$\frac{CR+AR}{AR} = \frac{4}{3} + 1$$

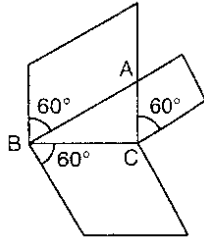
$$\Rightarrow \frac{AC}{AR} = \frac{7}{3}$$

$$\Rightarrow AR = \frac{3}{7}AC$$

Hence proved



18. Prove that the area of a rhombus on the hypotenuse of a right-angled triangle, with one of the angles as  $60^\circ$ , is equal to the sum of the areas of rhombuses with one of their angles as  $60^\circ$  drawn on the other two sides.



**Ans:** Hint: Area of Rhombus of side  $a$  & one angle of  $60^\circ$

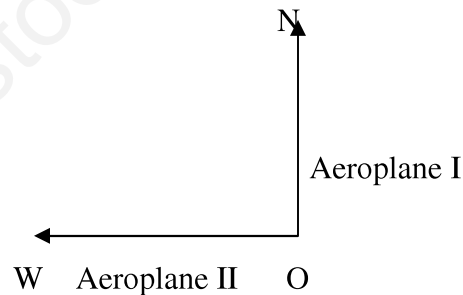
$$= \frac{\sqrt{3}}{2} \times a \times a = \frac{\sqrt{3}}{2} a^2$$

19. An aeroplane leaves an airport and flies due north at a speed of 1000 km/h. At the same time, another plane leaves the same airport and flies due west at a speed of 1200 km/h. How far apart will be the two planes after  $1\frac{1}{2}$  hours. (Ans:  $300\sqrt{61}$  km)

**Ans:**  $ON = 1500$  km (dist =  $s \times t$ )

$OW = 1800$  km

$$\begin{aligned} NW &= \sqrt{1500^2 + 1800^2} \\ &= \sqrt{5490000} \\ &= 300\sqrt{61} \text{ km} \end{aligned}$$



20. ABC is a right-angled isosceles triangle, right-angled at B. AP, the bisector of  $\angle BAC$ , intersects BC at P. Prove that  $AC^2 = AP^2 + 2(1+\sqrt{2})BP^2$

**Ans:**  $AC = \sqrt{2} AB$  (Since  $AB = BC$ )

$$\frac{AB}{AC} = \frac{BP}{CP} \text{ (Bisector Theorem)}$$

$$\Rightarrow CP = \sqrt{2} BP$$

$$AC^2 - AP^2 = AC^2 - (AB^2 + BP^2)$$

$$= AC^2 - AB^2 - BP^2$$

$$= BC^2 - BP^2$$

$$= (BP + PC)^2 - BP^2$$

$$= (BP + \sqrt{2} BP)^2 - BP^2$$

$$= 2BP^2 + 2\sqrt{2} BP^2$$

$$= 2(\sqrt{2} + 1) BP^2 \Rightarrow AC^2 = AP^2 + 2(1+\sqrt{2})BP^2$$

Proved

