

CHAPTER 3


ADDITION

Ques.1 How many objects?

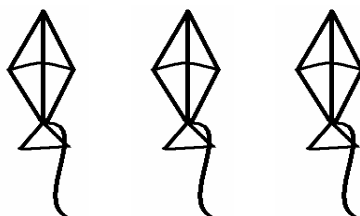
कितनी वस्तुएँ हैं ?

Example


उदाहरण



+



=



2


+

3


=

5


A




+



=



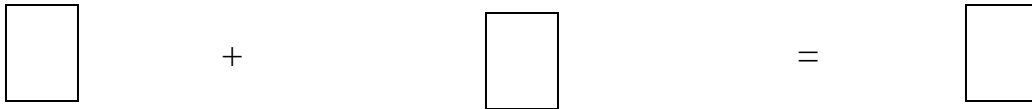
+



=



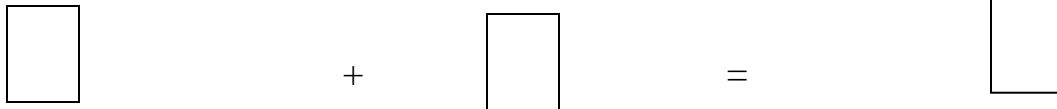
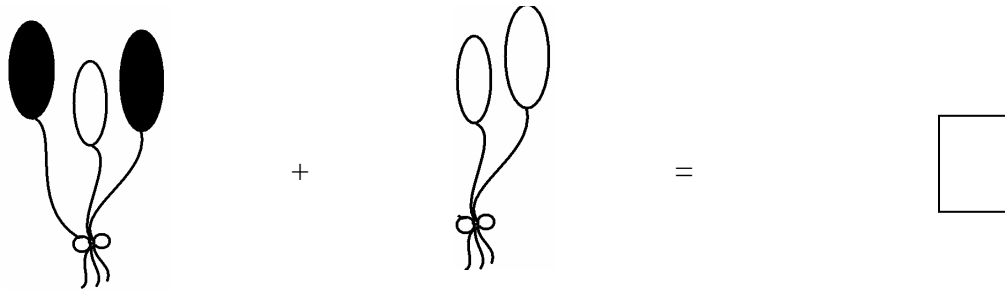
B



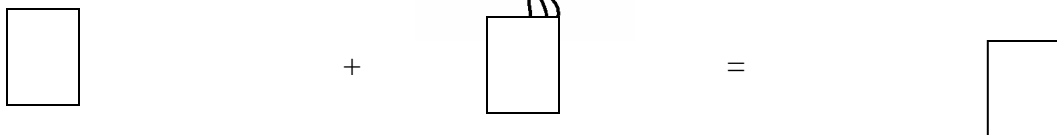
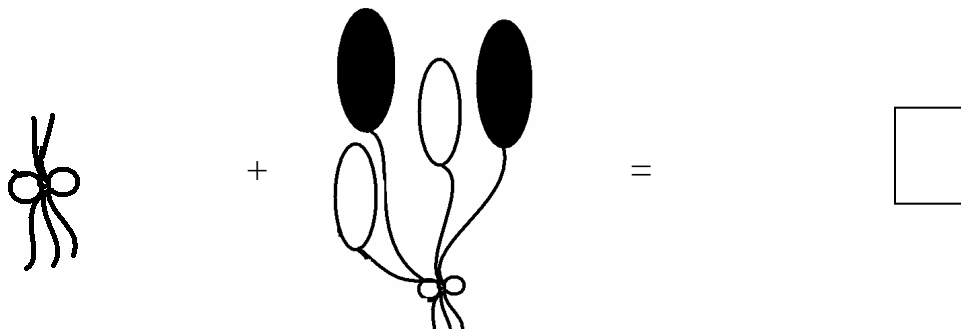
Ques.2 Add the balloons.

गुब्बारो को जमा करो।

A



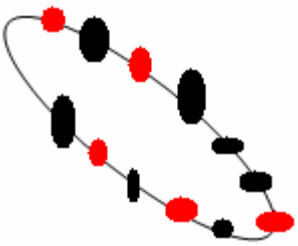
B



Ques.3 find the total beads.

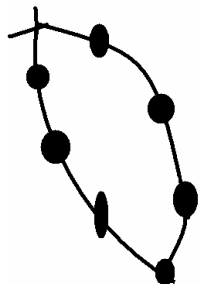
कुल मोतियो की संख्या बताओ ।

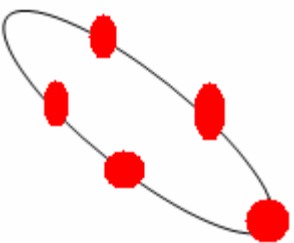
A



Red beads + Black beads =

लाल मोती + काले मोती =



+ 

=

मोती + मोती =

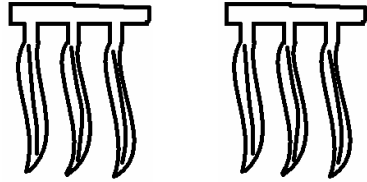
Ques.4 Find the missing number.

अज्ञात संख्या बताए ।

<input type="text"/> 2	+	<input type="text"/>	=	<input type="text"/> 9
<input type="text"/>	+	<input type="text"/> 5	=	<input type="text"/> 5
<input type="text"/> 7	+	<input type="text"/> 0	=	<input type="text"/>
<input type="text"/> 6	+	<input type="text"/>	=	<input type="text"/> 10

Ques.5 Three bananas chunu ate. Three bananas munnu ate. How many bananas papa brought. If you tell ,you are great.

चुन्नु ने केले ३ खाए मुन्नु ने ३ केले खाए तुम हो अगर महान बताओ कि कितने केले पापा लाए?



Ques.6 Add 1 to:

१ जमा करे ।

Eg. $4 \longrightarrow 5$

a $7 \longrightarrow$

b $2 \longrightarrow$

c $5 \longrightarrow$

Ques.7 Add zero to

० जमा करे ।

Eg. $\boxed{3} + \boxed{0} = \boxed{3}$

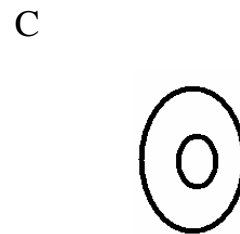
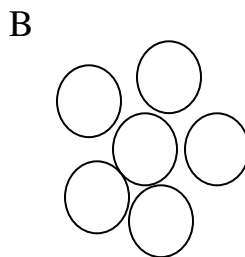
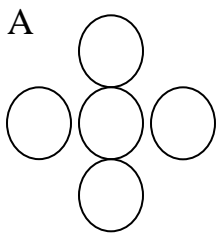
A $\boxed{0} + \boxed{2} = \boxed{}$

B $\boxed{7} + \boxed{0} = \boxed{}$

C $\boxed{0} + \boxed{9} = \boxed{}$

Ques.8 How many ○ (Rounds) are there?

कुल कितने गोले हैं ।



Ques.9 Find the total.
योग बताएँ ।

A 2 mangoes + 5 mangoes =
 आम आम



mangoes
आम

B 6 flowers + 6 flowers =
 फूल फूल



flowers
फूल

Ques.10 Add the encircled digits.
गोले लगी संख्याओं का योग करे ।

Eg. (1) 4 (5) = 1 + 5 = 6

A 2 (3) (4) =

B (7) (1) 2 =

Ques.11 Find the sum.

योग बताएँ

A $\boxed{5} + \boxed{0} = \boxed{}$

B $\boxed{5} + \boxed{} = \boxed{6}$

C $\boxed{} + \boxed{5} = \boxed{7}$

D $\boxed{7} + \boxed{} = \boxed{9}$

Ques.12 Add:

जमा करें ।

A $\triangle \triangle \triangle + \triangle \triangle =$

B $\triangle \triangle \triangle \triangle + \triangle \triangle \triangle =$

C $\bigcirc \bigcirc \bigcirc \bigcirc \bigcirc + \bigcirc \bigcirc \bigcirc \bigcirc \bigcirc =$

D $\bigcirc \bigcirc \bigcirc + \bigcirc \bigcirc \bigcirc =$

.Ques.13 Add the encircle numbers.

गोल लगी संख्याओं का योग करें ।

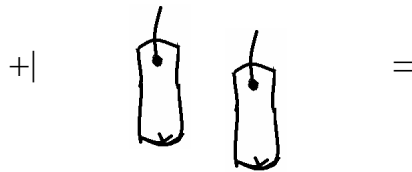
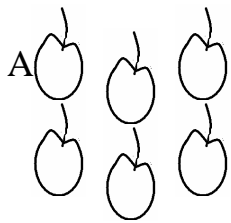
A $\bigcirc 1 \quad 2 \quad \bigcirc 3 \quad 4 =$

B $\begin{pmatrix} 2 \end{pmatrix} \begin{pmatrix} 4 \end{pmatrix} 5 \quad 7 \quad 8 \quad =$

C $3 \quad 5 \quad \begin{pmatrix} 4 \end{pmatrix} \quad 0 \quad \begin{pmatrix} 1 \end{pmatrix} \quad =$

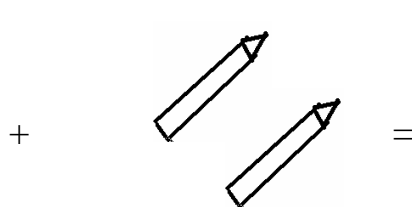
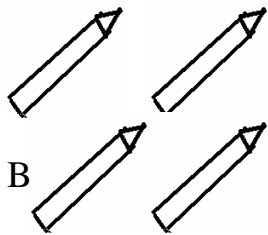
D $\begin{pmatrix} 0 \end{pmatrix} \begin{pmatrix} 1 \end{pmatrix} 2 \quad 3 \quad 4 \quad =$

Ques.14 Add
जमा करें ।




Neeta's apples
नीता के सेब

sita's pears
सीता के नाशपाती



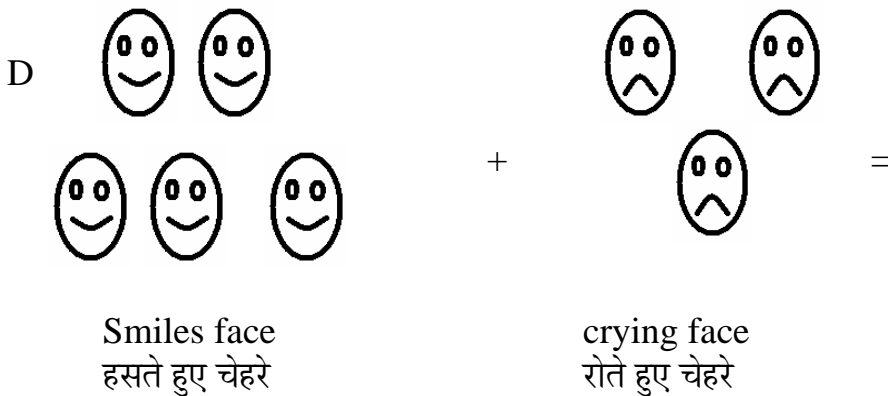
Sita's pencils
सीता की पेंसिलें

Reeta's pencils
रीता की पेंसिलें



Red flowers
लाल फूल

orange flowers
संतरी फूल



Ques.15 My father gave me 5 pencils. My mother gave me 1 pencil. How many pencils do I have?

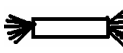

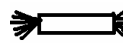
मेरे पिता ने मुझे 5 पेन्सिलें दी । मेरी माता ने मुझे 1 पेन्सिल दी । बताओ मेरे पास कुल कितनी पेन्सिल हुई ?



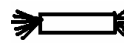
Ques.16 Sita's sister gave her 2 toys and her mother gave her 3 toys. How many toys she has in total?

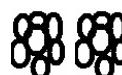
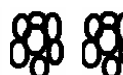



सीता की बहन ने उसे 2 खिलौने दिए और उसकी माता ने उसे 3 खिलौने दिए । बताओ सीता के पास कुल कितने खिलौने हुए ?






Ques.17 I ate one biscuit in the morning and two biscuit in the evening. How many biscuits did I eat in all?

मेने सुबह 1 बिस्कुट खाया और शाम को 2 बिस्कुट खाये । बताओ मेने कुल कितने बिस्कुट खाए ?

Ques.18 my father gave me  toffee. My mother gave me   toffees. How many toffees I have in total.

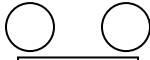

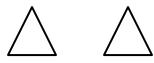
मेरे पिता ने मुझे  टॉफी दी । मेरी माता ने मुझे   टॉफियाँ दी । बताओ मेरे पास कुल कितनी टॉफियाँ है ?

Ques.19 Sita's sister gave her    flowers. I gave her   flowers. How many flowers she has in total?

सीता की बहन ने उसे    फूल दिए । मेने उसे   फूल दिए । उसके पास कुल कितने फूल हुए?

Ques.20 Add the \triangle s and \bigcirc s

\triangle और \bigcirc को जोड़ो ।



=

ANSWERS

Ans.1

- a) 8
८
- b) 7
७

Ans.2

- a) 5
५
- b) 7
७

Ans.3

- a) 6
६
- b) 12
१२

Ans.4

- a) 7
७
- b) 0
०
- c) 7
७
- d) 4
४

Ans.5 6 Bananas (6 केले)

Ans.6

- a) 8
८
- b) 3
३
- c) 6
६

Ans.7

- a) 2
२
- b) 7
७
- c) 9
९

Ans.8

- a) 5
५
- b) 6
६
- c) 2
२

Ans.9

- a) 7
७
- b) 12
१२

Ans.10

- a) 7
७
- b) 8
८

Ans.11

- a) 5
५
- b) 1
१
- c) 2
२
- d) 2

२

Ans.12

- a) 5
५
b) 7
७
c) 10
१०
d) 6
६

Ans.13

- a) 4
४
b) 6
६
c) 5
५
d) 1
१

Ans.14

९

- a) 8
८
b) 6
६
c) 7
७
d) 8
८

Ans.15 6 pencils. (6 पेन्सिले)

Ans.16 5 toys. (5 खिलौने)

Ans.17 Three biscuits. (तीन बिस्कुट)

Ans.18 3 Toffees. (3 टॉफियाँ)

Ans.19 5 Flowers. (5 फूल)

Ans.20 9