

**Bal Bharati Public School, Pusa Road Campus, New Delhi**  
**Session 2012-2013**

Worksheet No. 7


Subject : Maths

Name ..... Date : ..... Class/Sec: I, .....


Q1. Put a circle around the even numbers and a square around the odd numbers.

3	6	7	5	8	12	4	9
15	1	19	2	20	25	10	17
84	53	49	92	77	61	59	51


Q2. Fill In the blanks:



$$5 + 5 + 5 = \underline{\hspace{2cm}} \times \underline{\hspace{2cm}} = \underline{\hspace{2cm}}$$




$$2 + 2 + 2 + 2 = \underline{\hspace{2cm}} \times \underline{\hspace{2cm}} = \underline{\hspace{2cm}}$$



$$3 + 3 + 3 + 3 = \underline{\hspace{2cm}} \times \underline{\hspace{2cm}} = \underline{\hspace{2cm}}$$

Q3. Observe the given pictures and fill in the blanks:



A. \_\_\_\_\_ is fifth from the right.

B. Ball is \_\_\_\_\_ from the left.

C. \_\_\_\_\_ is second from the left.

D. What is the position of the flower from the right? \_\_\_\_\_

E. \_\_\_\_\_ is third from the right.

Q.4 Fill in the blanks:

a.  $2 \times 7 =$  \_\_\_\_\_

b.  $5 \times 2 =$  \_\_\_\_\_

c.  $2 \times 8 =$  \_\_\_\_\_

d.  $10 \times 3 =$  \_\_\_\_\_