



















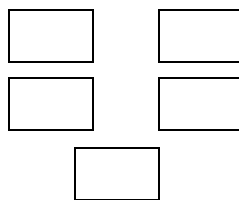


NameDate :..... Class/Sec: I

Q 1. Complete the series given below:



Q2. Count the following figures and write the answer in words:



Q3. What comes after?

82

19

99

4

30

Q4. What comes before?

..... 63

..... 10

..... 75

..... 40

..... 51

Q5. Fill in the blanks (before and after)

31

..... 21

..... 26

..... 100

58

73

..... 60

39

Q6. Match the following:



Two




Nine



Eight

Six



Q7. Write random counting from:

a) 23-32

b) 58-67

c) 80-89